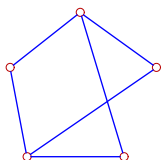


Ранг-полином

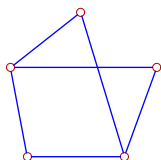
Найти ранг-полином графа.

Задача 23.1. *Грачёв Дмитрий*



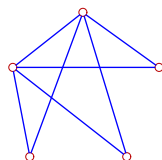
$$x_0 = 2, y_0 = 1$$

Задача 23.2. *Коломиец Ярослав*



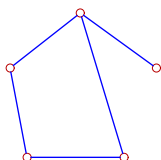
$$x_0 = 1, y_0 = 4$$

Задача 23.3. *Лапташкин Григорий*



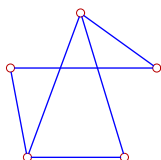
$$x_0 = 2, y_0 = 4$$

Задача 23.4. *Майков Дмитрий*



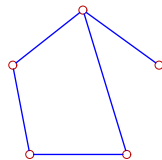
$$x_0 = 2, y_0 = 1$$

Задача 23.5. *Оборин Дмитрий*



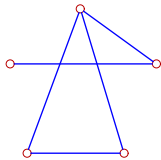
$$x_0 = 2, y_0 = 4$$

Задача 23.6. *Осокина Майя*



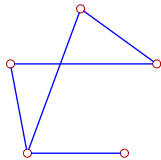
$$x_0 = 3, y_0 = 1$$

Задача 23.7. *Переверзев Михаил Ильич*



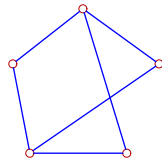
$$x_0 = 1, y_0 = 2$$

Задача 23.8. *Ратников Матвей*



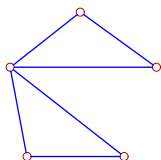
$$x_0 = 3, y_0 = 4$$

Задача 23.9. *Семенякина Елизавета*



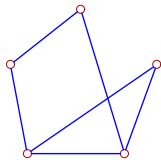
$$x_0 = 3, y_0 = 1$$

Задача 23.10. *Снегирев Иван*



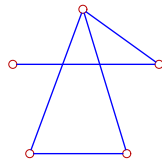
$$x_0 = 3, y_0 = 1$$

Задача 23.11. *Толушкин Ростислав*



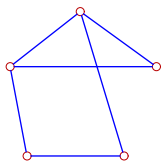
$$x_0 = 1, y_0 = 2$$

Задача 23.12. *Турчанинов Никита*



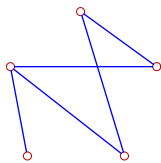
$$x_0 = 2, y_0 = 1$$

Задача 23.13. *Чистяков Евгений*



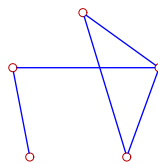
$$x_0 = 2, y_0 = 4$$

Задача 23.14. *Чугреев Никита*



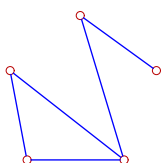
$$x_0 = 2, y_0 = 3$$

Задача 23.15.



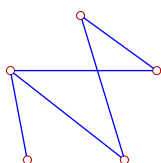
$$x_0 = 1, y_0 = 2$$

Задача 23.16.



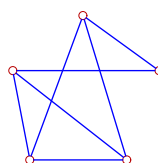
$$x_0 = 1, y_0 = 4$$

Задача 23.17.



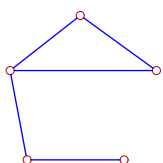
$$x_0 = 1, y_0 = 3$$

Задача 23.18.



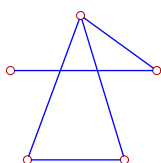
$$x_0 = 2, y_0 = 4$$

Задача 23.19.



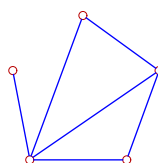
$$x_0 = 3, y_0 = 4$$

Задача 23.20.



$$x_0 = 1, y_0 = 3$$

Задача 23.21.



$$x_0 = 2, y_0 = 4$$