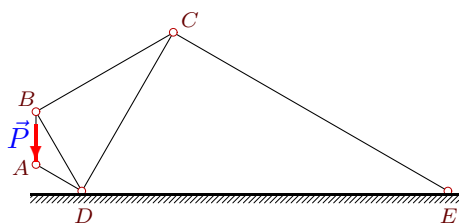


Плоская конструкция из 6 стержней

Кирсанов М.Н. **Решебник. Теоретическая механика**/Под ред. А. И. Кириллова.- М.:ФИЗМАТЛИТ, 2008.- 384 с. (с.14.)

Задача 1.1.

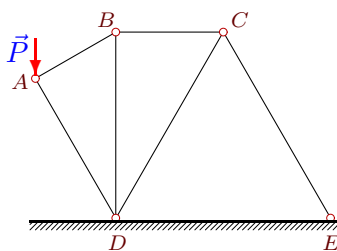
40



$P=8$ кН,
 $\angle ABD=30^\circ$,
 $\angle ADB=30^\circ$,
 $\angle BDC=60^\circ$,
 $\angle BCD=30^\circ$,
 $\angle CDE=60^\circ$,
 $\angle CED=30^\circ$.

Задача 1.2.

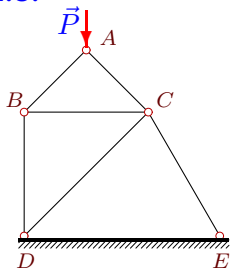
40



$P=29$ кН,
 $\angle ABD=60^\circ$,
 $\angle ADB=30^\circ$,
 $\angle BDC=30^\circ$,
 $\angle BCD=60^\circ$,
 $\angle CDE=60^\circ$,
 $\angle CED=60^\circ$.

Задача 1.3.

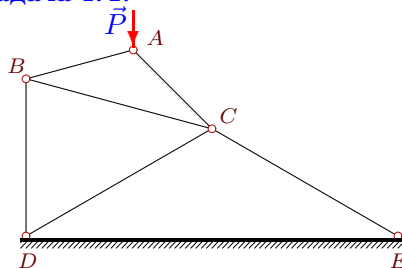
40



$P=24$ кН,
 $\angle ACB=45^\circ$,
 $\angle ABC=45^\circ$,
 $\angle BDC=45^\circ$,
 $\angle BCD=45^\circ$,
 $\angle CDE=45^\circ$,
 $\angle CED=60^\circ$.

Задача 1.4.

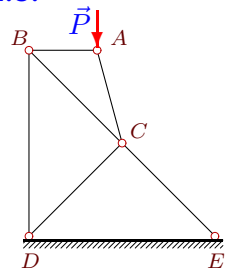
40



$P=20$ кН,
 $\angle ACB=30^\circ$,
 $\angle ABC=30^\circ$,
 $\angle BDC=60^\circ$,
 $\angle BCD=45^\circ$,
 $\angle CDE=30^\circ$,
 $\angle CED=30^\circ$.

Задача 1.5.

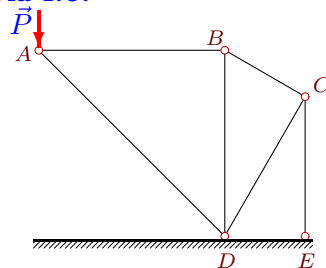
40



$P=20$ кН,
 $\angle ACB=30^\circ$,
 $\angle ABC=45^\circ$,
 $\angle BDC=45^\circ$,
 $\angle BCD=90^\circ$,
 $\angle CDE=45^\circ$,
 $\angle CED=45^\circ$.

Задача 1.6.

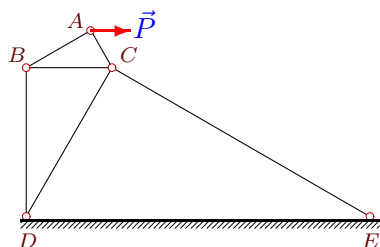
40



$P=30$ кН,
 $\angle ABD=90^\circ$,
 $\angle ADB=45^\circ$,
 $\angle BDC=30^\circ$,
 $\angle BCD=90^\circ$,
 $\angle CDE=60^\circ$,
 $\angle CED=90^\circ$.

Задача 1.7.

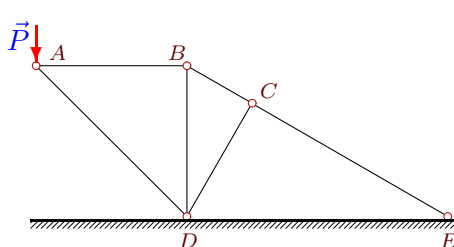
40



$P=31$ кН,
 $\angle ACB=60^\circ$,
 $\angle ABC=30^\circ$,
 $\angle BDC=30^\circ$,
 $\angle BCD=60^\circ$,
 $\angle CDE=60^\circ$,
 $\angle CED=30^\circ$.

Задача 1.8.

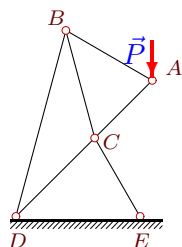
40



$P=20$ кН,
 $\angle ABD=90^\circ$,
 $\angle ADB=45^\circ$,
 $\angle BDC=30^\circ$,
 $\angle BCD=90^\circ$,
 $\angle CDE=60^\circ$,
 $\angle CED=30^\circ$.

Задача 1.9.

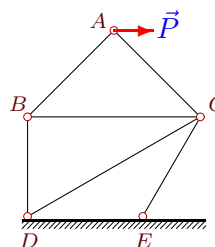
40



$P=25$ кН,
 $\angle ACB=60^\circ$,
 $\angle ABC=45^\circ$,
 $\angle BDC=30^\circ$,
 $\angle BCD=120^\circ$,
 $\angle CDE=45^\circ$,
 $\angle CED=60^\circ$.

Задача 1.10.

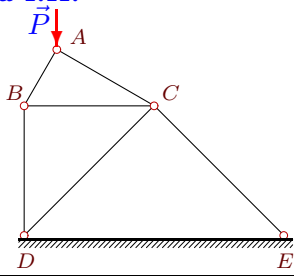
40



$P=1$ кН,
 $\angle ACB=45^\circ$,
 $\angle ABC=45^\circ$,
 $\angle BDC=60^\circ$,
 $\angle BCD=30^\circ$,
 $\angle CDE=30^\circ$,
 $\angle CED=120^\circ$.

Задача 1.11.

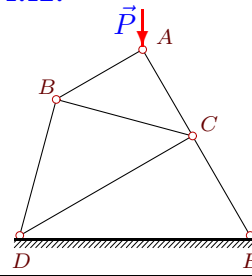
40



$P=1$ кН,
 $\angle ACB=30^\circ$,
 $\angle ABC=60^\circ$,
 $\angle BDC=45^\circ$,
 $\angle BCD=45^\circ$,
 $\angle CDE=45^\circ$,
 $\angle CED=45^\circ$.

Задача 1.12.

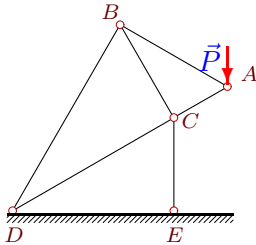
40



$P=24$ кН,
 $\angle ACB=45^\circ$,
 $\angle ABC=45^\circ$,
 $\angle BDC=45^\circ$,
 $\angle BCD=45^\circ$,
 $\angle CDE=30^\circ$,
 $\angle CED=60^\circ$.

Задача 1.13.

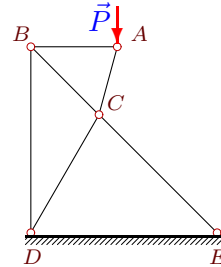
40



$P=28$ кН,
 $\angle ACB=90^\circ$,
 $\angle ABC=30^\circ$,
 $\angle BDC=30^\circ$,
 $\angle BCD=90^\circ$,
 $\angle CDE=30^\circ$,
 $\angle CED=90^\circ$.

Задача 1.14.

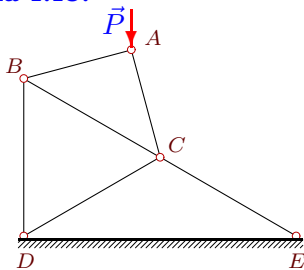
40



$P=15$ кН,
 $\angle ACB=60^\circ$,
 $\angle ABC=45^\circ$,
 $\angle BDC=30^\circ$,
 $\angle BCD=105^\circ$,
 $\angle CDE=60^\circ$,
 $\angle CED=45^\circ$.

Задача 1.15.

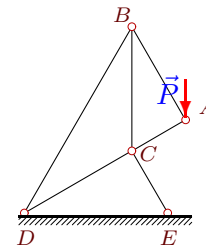
40



$P=9$ кН,
 $\angle ACB=45^\circ$,
 $\angle ABC=45^\circ$,
 $\angle BDC=60^\circ$,
 $\angle BCD=60^\circ$,
 $\angle CDE=30^\circ$,
 $\angle CED=30^\circ$.

Задача 1.16.

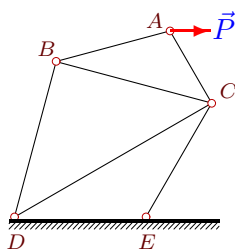
40



$P=19$ кН,
 $\angle ACB=60^\circ$,
 $\angle ABC=30^\circ$,
 $\angle BDC=30^\circ$,
 $\angle BCD=120^\circ$,
 $\angle CDE=30^\circ$,
 $\angle CED=60^\circ$.

Задача 1.17.

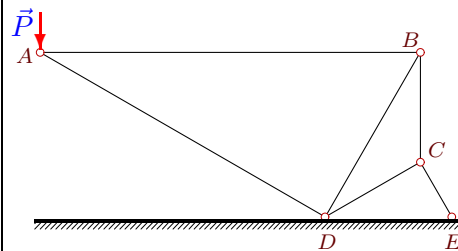
40



$P=5$ кН,
 $\angle ACB=45^\circ$,
 $\angle ABC=30^\circ$,
 $\angle BDC=45^\circ$,
 $\angle BCD=45^\circ$,
 $\angle CDE=30^\circ$,
 $\angle CED=120^\circ$.

Задача 1.18.

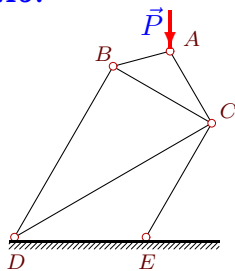
40



$P=26$ кН,
 $\angle ABD=60^\circ$,
 $\angle ADB=90^\circ$,
 $\angle BDC=30^\circ$,
 $\angle BCD=120^\circ$,
 $\angle CDE=30^\circ$,
 $\angle CED=60^\circ$.

Задача 1.19.

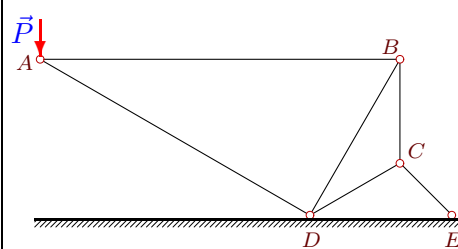
40



$P=19$ кН,
 $\angle ACB=30^\circ$,
 $\angle ABC=45^\circ$,
 $\angle BDC=30^\circ$,
 $\angle BCD=60^\circ$,
 $\angle CDE=30^\circ$,
 $\angle CED=120^\circ$.

Задача 1.20.

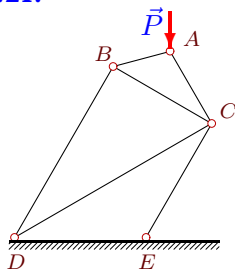
40



$P=7$ кН,
 $\angle ABD=60^\circ$,
 $\angle ADB=90^\circ$,
 $\angle BDC=30^\circ$,
 $\angle BCD=120^\circ$,
 $\angle CDE=30^\circ$,
 $\angle CED=45^\circ$.

Задача 1.21.

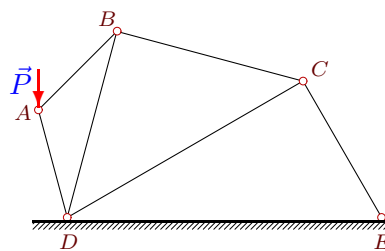
40



$P=26$ кН,
 $\angle ACB=30^\circ$,
 $\angle ABC=45^\circ$,
 $\angle BDC=30^\circ$,
 $\angle BCD=60^\circ$,
 $\angle CDE=30^\circ$,
 $\angle CED=120^\circ$.

Задача 1.22.

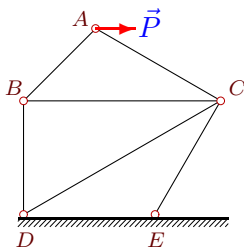
40



$P=24$ кН,
 $\angle ABD=30^\circ$,
 $\angle ADB=30^\circ$,
 $\angle BDC=45^\circ$,
 $\angle BCD=45^\circ$,
 $\angle CDE=30^\circ$,
 $\angle CED=60^\circ$.

Задача 1.23.

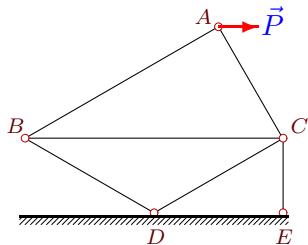
40



$P=30$ кН,
 $\angle ACB=30^\circ$,
 $\angle ABC=45^\circ$,
 $\angle BDC=60^\circ$,
 $\angle BCD=30^\circ$,
 $\angle CDE=30^\circ$,
 $\angle CED=120^\circ$.

Задача 1.25.

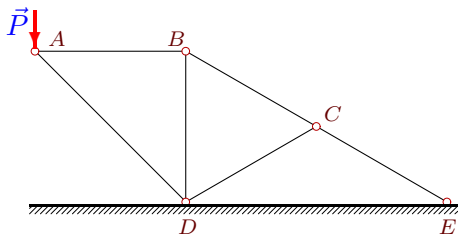
40



$P=3$ кН,
 $\angle ACB=60^\circ$,
 $\angle ABC=30^\circ$,
 $\angle BDC=120^\circ$,
 $\angle BCD=30^\circ$,
 $\angle CDE=30^\circ$,
 $\angle CED=90^\circ$.

Задача 1.27.

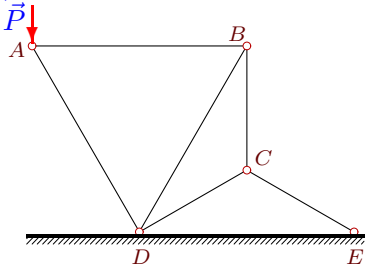
40



$P=25$ кН,
 $\angle ABD=90^\circ$,
 $\angle ADB=45^\circ$,
 $\angle BDC=60^\circ$,
 $\angle BCD=60^\circ$,
 $\angle CDE=30^\circ$,
 $\angle CED=30^\circ$.

Задача 1.29.

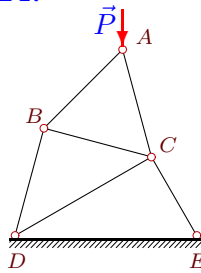
40



$P=19$ кН,
 $\angle ABD=60^\circ$,
 $\angle ADB=60^\circ$,
 $\angle BDC=30^\circ$,
 $\angle BCD=120^\circ$,
 $\angle CDE=30^\circ$,
 $\angle CED=30^\circ$.

Задача 1.24.

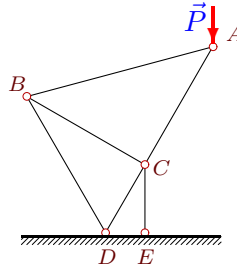
40



$P=14$ кН,
 $\angle ACB=60^\circ$,
 $\angle ABC=60^\circ$,
 $\angle BDC=45^\circ$,
 $\angle BCD=45^\circ$,
 $\angle CDE=30^\circ$,
 $\angle CED=60^\circ$.

Задача 1.26.

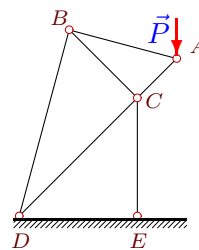
40



$P=10$ кН,
 $\angle ACB=90^\circ$,
 $\angle ABC=45^\circ$,
 $\angle BDC=60^\circ$,
 $\angle BCD=90^\circ$,
 $\angle CDE=60^\circ$,
 $\angle CED=90^\circ$.

Задача 1.28.

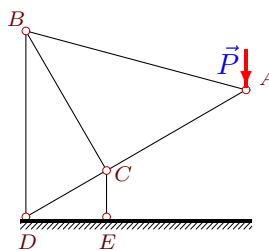
40



$P=16$ кН,
 $\angle ACB=90^\circ$,
 $\angle ABC=30^\circ$,
 $\angle BDC=30^\circ$,
 $\angle BCD=90^\circ$,
 $\angle CDE=45^\circ$,
 $\angle CED=90^\circ$.

Задача 1.30.

40



$P=25$ кН,
 $\angle ACB=90^\circ$,
 $\angle ABC=45^\circ$,
 $\angle BDC=60^\circ$,
 $\angle BCD=90^\circ$,
 $\angle CDE=30^\circ$,
 $\angle CED=90^\circ$.