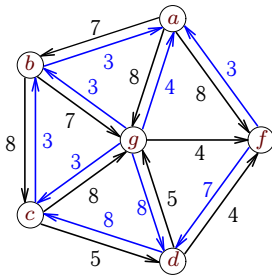


# Задача коммивояжера

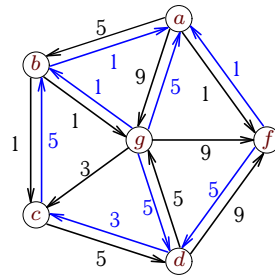
Найти кратчайший гамильтонов цикл.

**Задача 30.1**



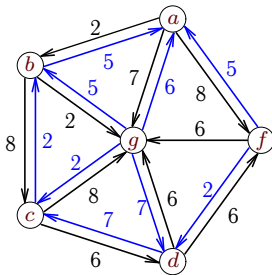
30.1

**Задача 30.2**



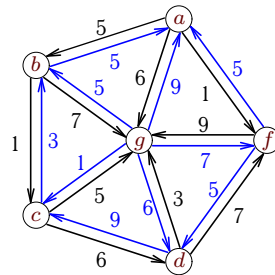
30.1

**Задача 30.3**



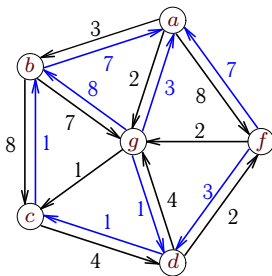
30.1

**Задача 30.4**



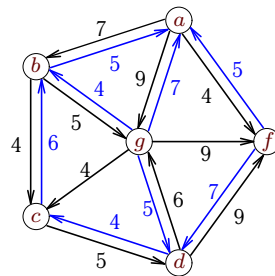
30.1

**Задача 30.5**



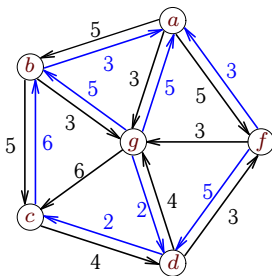
30.1

**Задача 30.6**



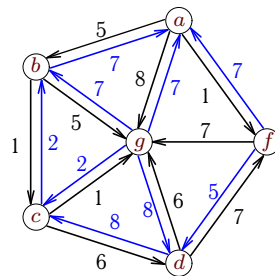
30.1

**Задача 30.7**



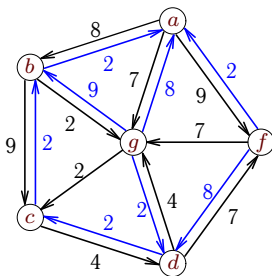
30.1

**Задача 30.8**



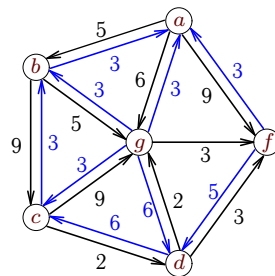
30.1

**Задача 30.9**



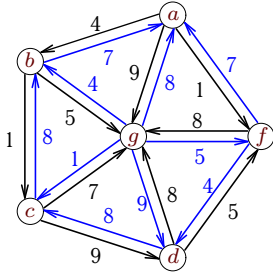
30.1

**Задача 30.10**



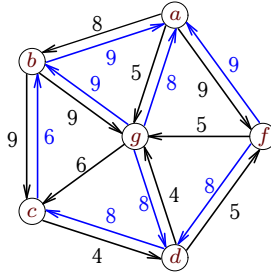
30.1

Задача 30.11



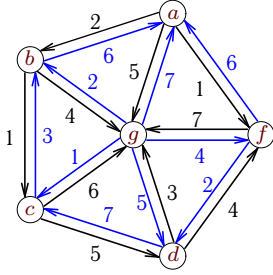
30.1

Задача 30.12



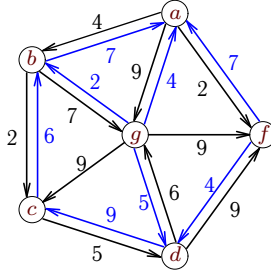
30.1

Задача 30.13



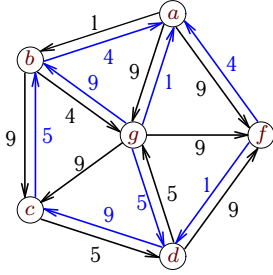
30.1

Задача 30.14



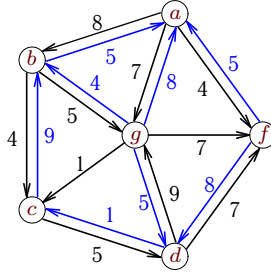
30.1

Задача 30.15



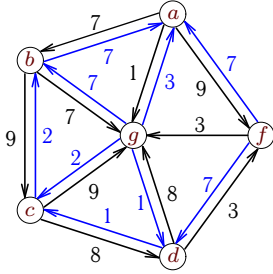
30.1

Задача 30.16



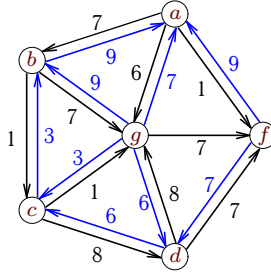
30.1

Задача 30.17



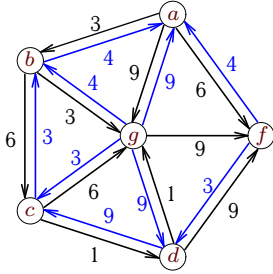
30.1

Задача 30.18



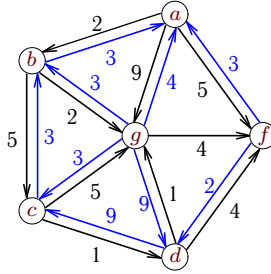
30.1

Задача 30.19



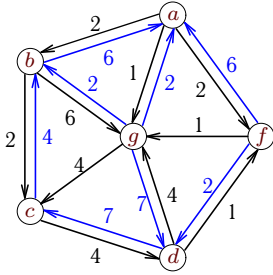
30.1

Задача 30.20



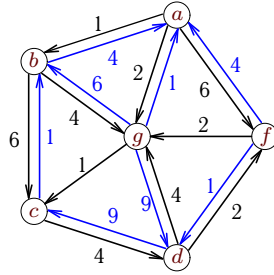
30.1

Задача 30.21



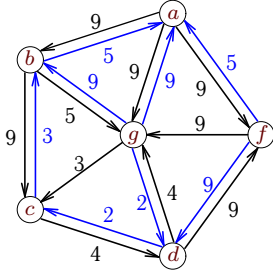
30.1

Задача 30.22



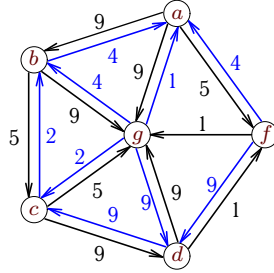
30.1

Задача 30.23



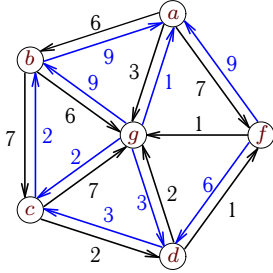
30.1

Задача 30.24



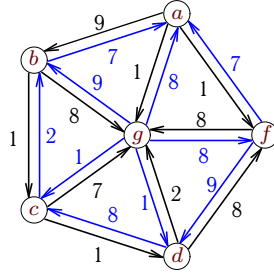
30.1

Задача 30.25



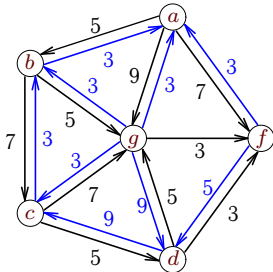
30.1

Задача 30.26



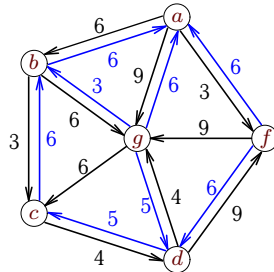
30.1

Задача 30.27



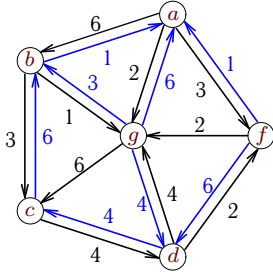
30.1

Задача 30.28



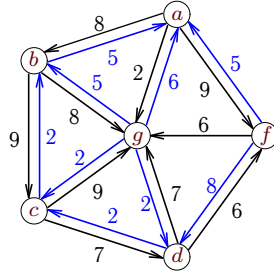
30.1

Задача 30.29



30.1

Задача 30.30



30.1