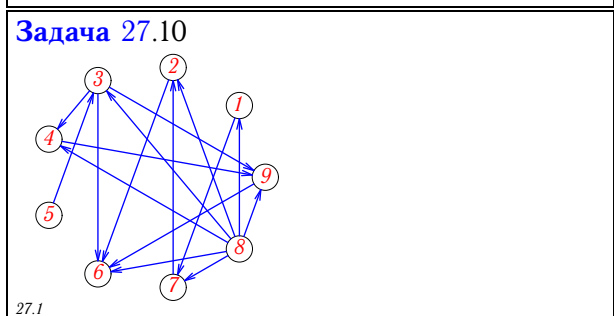
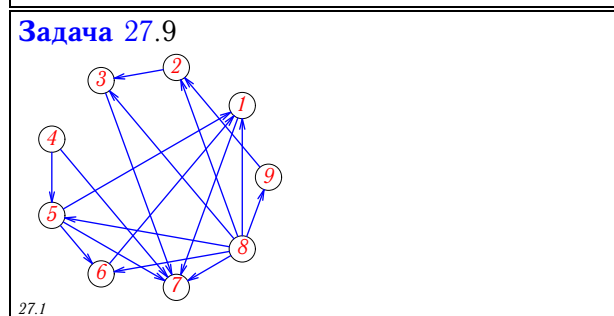
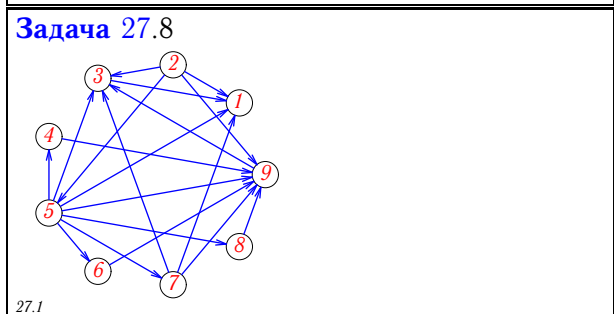
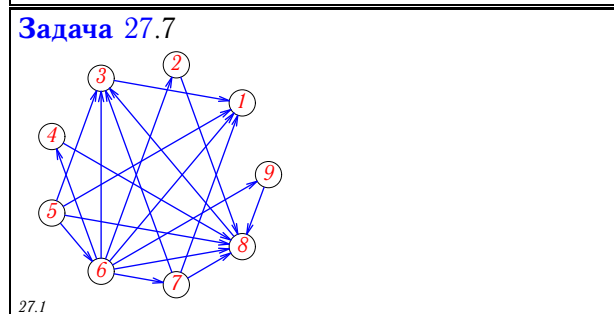
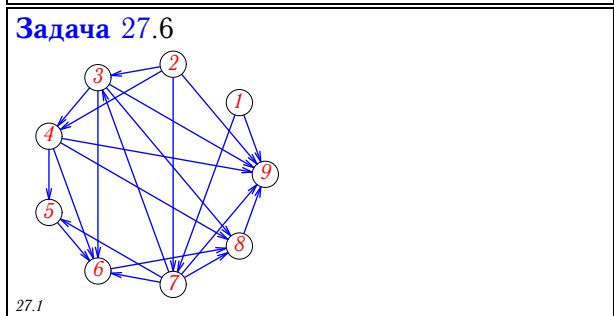
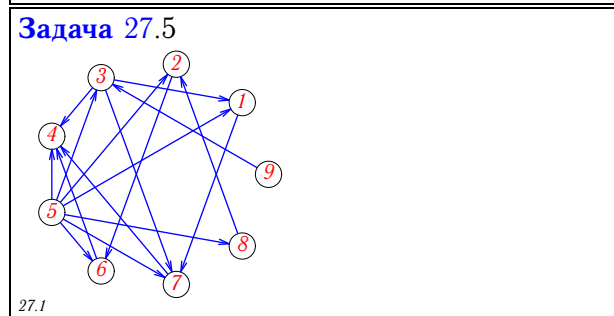
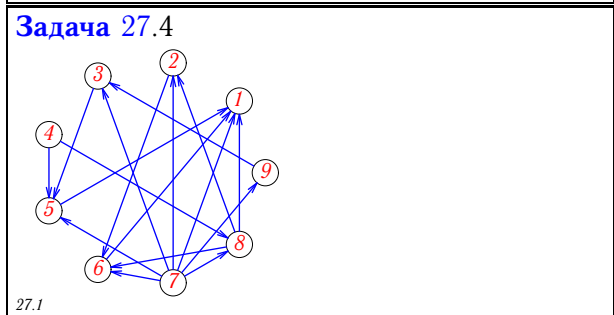
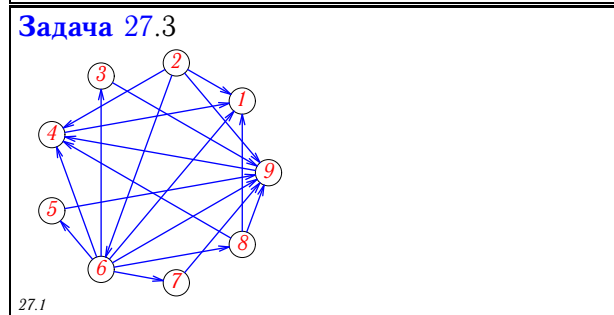
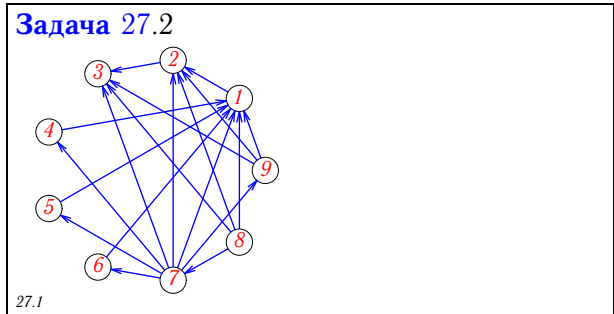
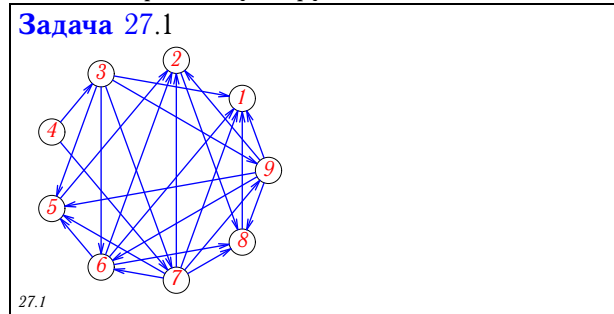
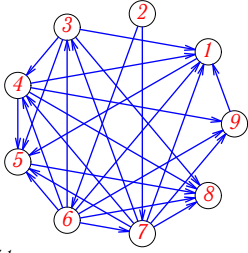


Топологическая сортировка бесконтурной сети

Найти порядковую функцию сети.

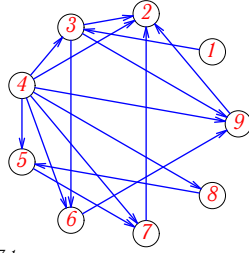


Задача 27.11



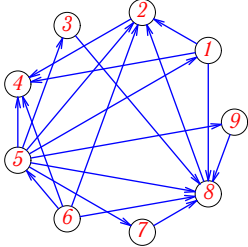
27.1

Задача 27.12



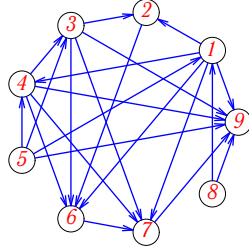
27.1

Задача 27.13



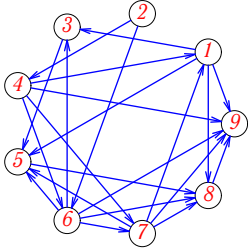
27.1

Задача 27.14



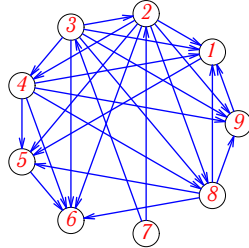
27.1

Задача 27.15



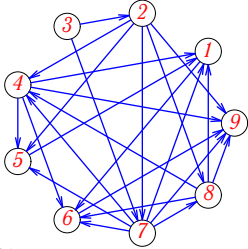
27.1

Задача 27.16



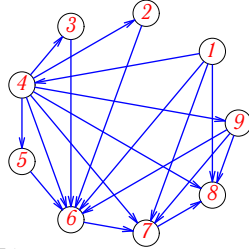
27.1

Задача 27.17



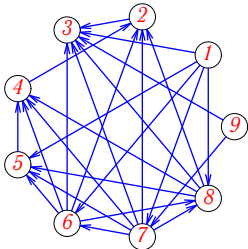
27.1

Задача 27.18



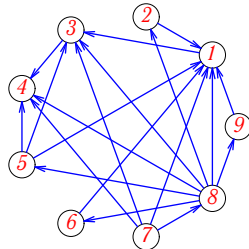
27.1

Задача 27.19



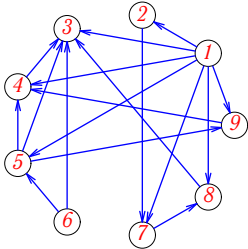
27.1

Задача 27.20



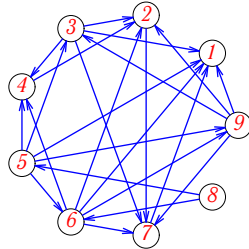
27.1

Задача 27.21



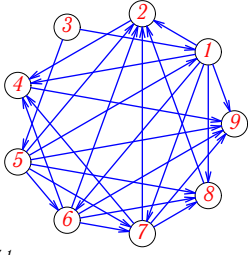
27.1

Задача 27.22



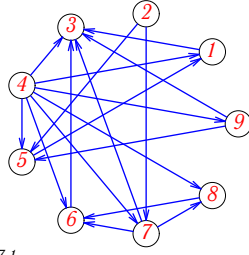
27.1

Задача 27.23



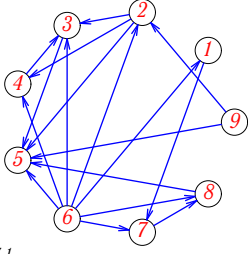
27.1

Задача 27.24



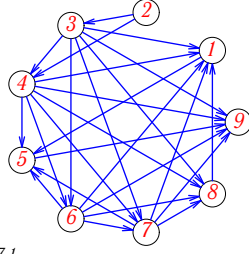
27.1

Задача 27.25



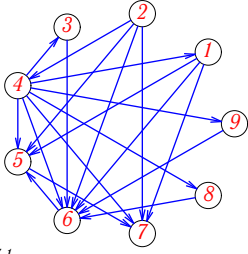
27.1

Задача 27.26



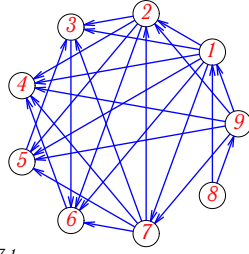
27.1

Задача 27.27



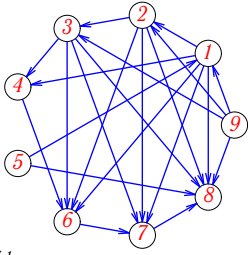
27.1

Задача 27.28



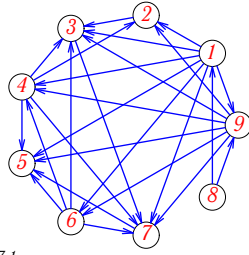
27.1

Задача 27.29



27.1

Задача 27.30



27.1

Топологическая сортировка бесконтурной сети

1	4, 3, 7, 9, 6, 5, 2, 8, 1
2	8, 7, (5, 4, 6, 9), 1, 2, 3,
3	2, 6, (3, 5, 7, 8), 9, 4, 1,
4	(4, 7)(8, 9)(2, 3)(6, 5), 1.
5	(9, 5)(3, 8)(1, 2)(7, 6), 4.
6	(1, 2), 7, 3, 4, 5, 6, 8, 9
7	5, 6, (2, 9, 4, 7), 8, 3, 1,
8	2, 5, (4, 8, 6, 7), 9, 3, 1,
9	(4, 8)(5, 9)(6, 2)(1, 3), 7.
10	(5, 8)(3, 1)(4, 7)(9, 2), 6.
11	2, 6, 7, 3, 4, 9, 1, 5, 8
12	(1, 4)(3, 8)(6, 5)(9, 7), 2.
13	6, 5, (9, 3, 7, 1), 8, 2, 4,
14	(8, 5), 1, 4, 3, 2, 6, 7, 9
15	2, 4, 6, 7, 1, 3, 5, 8, 9
16	7, 3, 2, 4, 8, 9, 1, 5, 6
17	3, 2, 7, 8, 4, 5, 1, 6, 9
18	1, 4, (2, 3, 5, 9), 6, 7, 8,
19	(9, 1), 7, 6, 8, 5, 4, 2, 3
20	7, 8, (6, 9, 2, 5), 1, 3, 4,
21	(6, 1)(5, 2)(9, 7)(4, 8), 3.
22	8, 5, 6, 9, 3, 4, 2, 7, 1
23	3, 5, 1, 6, 7, 8, 2, 4, 9
24	(2, 4)(7, 9)(8, 5)(6, 1), 3.
25	(9, 6)(2, 1)(4, 7)(3, 8), 5.
26	2, 3, 4, 6, 7, 8, 1, 5, 9
27	2, 4, (3, 8, 9, 1), 6, 5, 7,
28	8, 9, 1, 7, 2, 5, 3, 6, 4
29	(5, 9), 1, 2, 3, 4, 6, 7, 8
30	8, 1, 9, 6, 4, 2, 3, 7, 5