

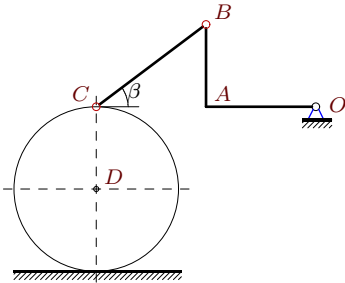
Скорости точек простого механизма (3 звена).

В указанном положении механизма задана угловая скорость одного из его звеньев. Звенья, направление которых не указано, принимать вертикальными или горизонтальными. Радиус цилиндра R . Размеры даны в метрах.

Кирсанов М.Н. **Решебник. Теоретическая механика**/Под ред. А. И. Кириллова.– М.: ФИЗМАТЛИТ, 2008. — 384 с. (с.158.)

Задача K17.1.

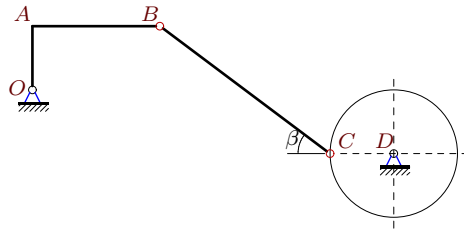
5



$$\omega_{OA_z} = 1\frac{1}{c}, \quad OA = 4, \quad AB = 3, \quad OA \perp AB, \\ BC = 5, \quad R = 3, \quad \operatorname{tg} \beta = 3/4.$$

Задача K17.2.

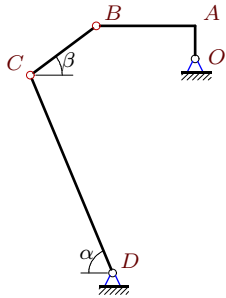
5



$$\omega_{BC_z} = -3\frac{1}{c}, \quad OA = 3, \quad AB = 6, \quad OA \perp AB, \\ BC = 10, \quad R = 3, \quad \operatorname{tg} \beta = 3/4.$$

Задача K17.3.

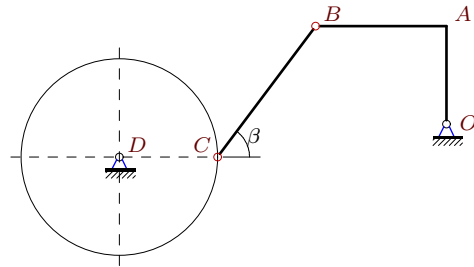
5



$$\omega_{OA_z} = 63\frac{1}{c}, \quad OA = 2, \quad AB = 6, \quad OA \perp AB, \\ BC = 5, \quad DC = 13, \quad \operatorname{tg} \beta = 3/4, \quad \operatorname{tg} \alpha = 12/5$$

Задача K17.4.

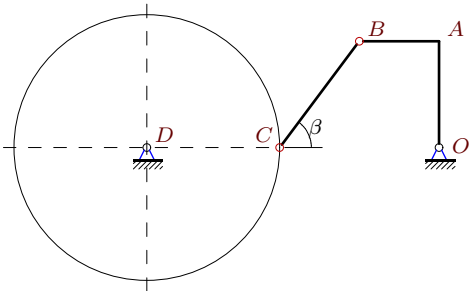
5



$$\omega_{OA_z} = -12\frac{1}{c}, \quad OA = 3, \quad AB = 4, \quad OA \perp AB, \\ BC = 5, \quad R = 3, \quad \operatorname{tg} \beta = 4/3.$$

Задача K17.5.

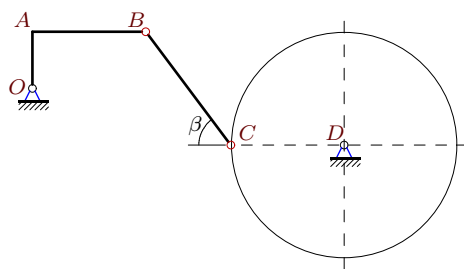
5



$$\omega_{OA_z} = -5\frac{1}{c}, \quad OA = 4, \quad AB = 3, \quad OA \perp AB, \\ BC = R = 5, \quad \operatorname{tg} \beta = 4/3.$$

Задача K17.6.

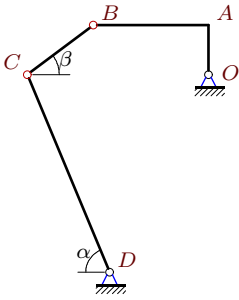
5



$$\omega_{DC_z} = 11\frac{1}{c}, \quad OA = 2, \quad AB = 4, \quad OA \perp AB, \\ BC = 5, \quad R = 4, \quad \operatorname{tg} \beta = 4/3.$$

Задача K17.7.

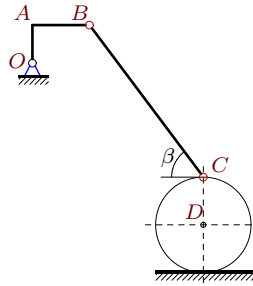
5



$\omega_{OA_z} = 21\frac{1}{c}$, $OA = 3$, $AB = 7$, $OA \perp AB$,
 $BC = 5$, $DC = 13$, $\text{tg } \beta = 3/4$, $\text{tg } \alpha = 12/5$

Задача K17.8.

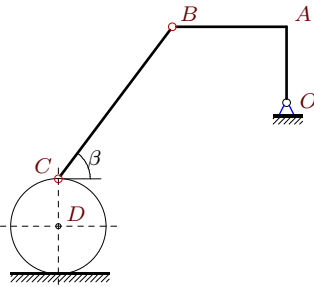
5



$\omega_{BC_z} = -5\frac{1}{c}$, $OA = 2$, $AB = 3$, $OA \perp AB$,
 $BC = 10$, $R = 2.5$, $\text{tg } \beta = 4/3$.

Задача K17.9.

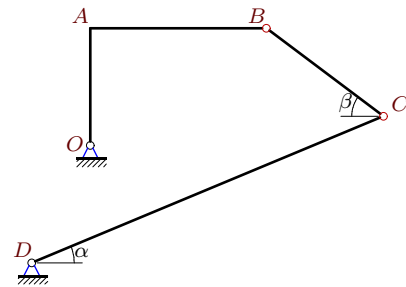
5



$\omega_{BC_z} = -5\frac{1}{c}$, $OA = 4$, $AB = 6$, $OA \perp AB$,
 $BC = 10$, $R = 2.5$, $\text{tg } \beta = 4/3$.

Задача K17.10.

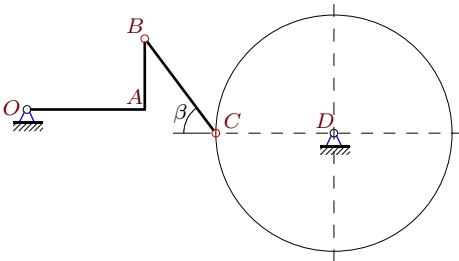
5



$\omega_{BC_z} = 9\frac{1}{c}$, $OA = 4$, $AB = 6$, $OA \perp AB$,
 $BC = 5$, $DC = 13$, $\text{tg } \beta = 3/4$, $\text{tg } \alpha = 5/12$

Задача K17.11.

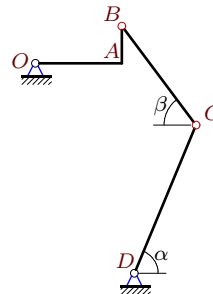
5



$\omega_{OA_z} = -20\frac{1}{c}$, $OA = 5$, $AB = 3$, $OA \perp AB$,
 $BC = R = 5$, $\text{tg } \beta = 4/3$.

Задача K17.12.

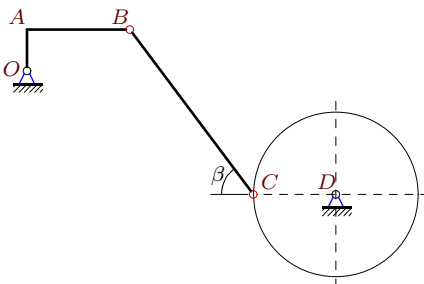
5



$\omega_{OA_z} = 112\frac{1}{c}$, $OA = 7$, $AB = 3$, $OA \perp AB$,
 $BC = 10$, $DC = 13$, $\text{tg } \beta = 4/3$, $\text{tg } \alpha = 12/5$

Задача K17.13.

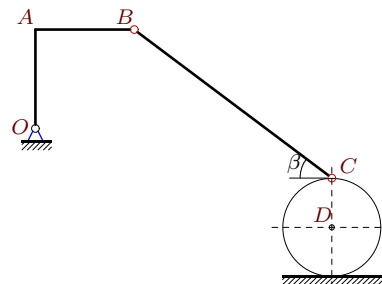
5



$\omega_{DC_z} = 13\frac{1}{c}$, $OA = 2$, $AB = 5$, $OA \perp AB$,
 $BC = 10$, $R = 4$, $\text{tg } \beta = 4/3$.

Задача K17.14.

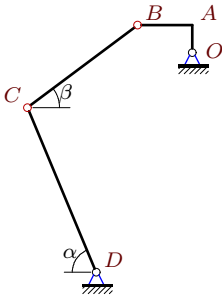
5



$\omega_{BC_z} = -2\frac{1}{c}$, $OA = AB = 4$, $OA \perp AB$,
 $BC = 10$, $R = 2$, $\text{tg } \beta = 3/4$.

Задача K17.15.

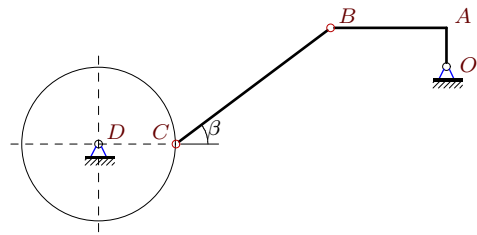
5



$\omega_{OA_z} = 63\frac{1}{c}$, $OA = 2$, $AB = 4$, $OA \perp AB$,
 $BC = 10$, $DC = 13$, $\operatorname{tg} \beta = 3/4$, $\operatorname{tg} \alpha = 12/5$

Задача K17.16.

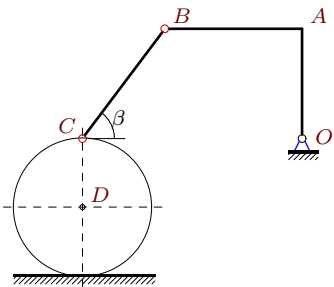
5



$\omega_{OA_z} = -6\frac{1}{c}$, $OA = 2$, $AB = 6$, $OA \perp AB$,
 $BC = 10$, $R = 4$, $\operatorname{tg} \beta = 3/4$.

Задача K17.17.

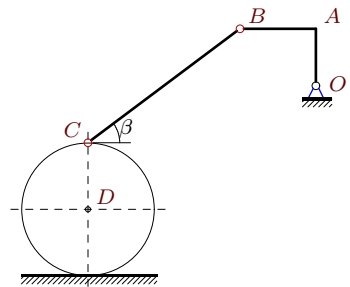
5



$\omega_{OA_z} = 15\frac{1}{c}$, $OA = 4$, $AB = 5$, $OA \perp AB$,
 $BC = 2R = 5$, $\operatorname{tg} \beta = 4/3$.

Задача K17.18.

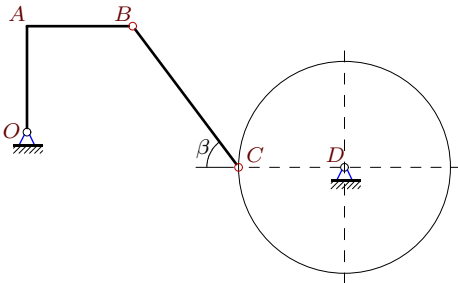
5



$\omega_{OA_z} = 14\frac{1}{c}$, $OA = 3$, $AB = 4$, $OA \perp AB$,
 $BC = 10$, $R = 3.5$, $\operatorname{tg} \beta = 3/4$.

Задача K17.19.

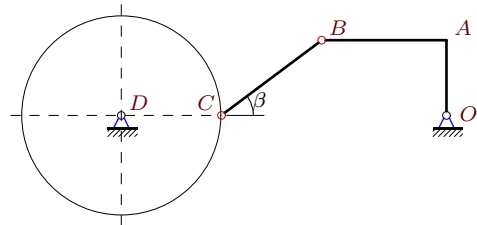
5



$\omega_{DC_z} = 7\frac{1}{c}$, $OA = AB = 3$, $OA \perp AB$,
 $BC = 5$, $R = 3$, $\operatorname{tg} \beta = 4/3$.

Задача K17.20.

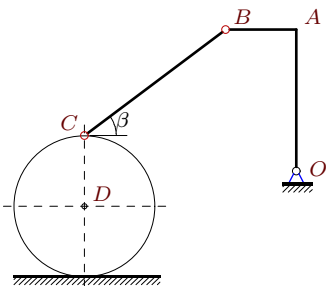
5



$\omega_{OA_z} = -4\frac{1}{c}$, $OA = 3$, $AB = 5$, $OA \perp AB$,
 $BC = 5$, $R = 4$, $\operatorname{tg} \beta = 3/4$.

Задача K17.21.

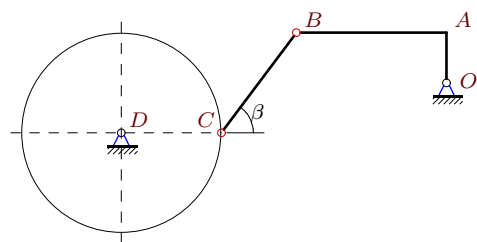
5



$\omega_{DC_z} = 11\frac{1}{c}$, $OA = 4$, $AB = 2$, $OA \perp AB$,
 $BC = 5$, $R = 2$, $\operatorname{tg} \beta = 3/4$.

Задача K17.22.

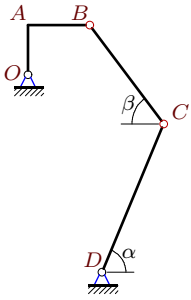
5



$\omega_{DC_z} = 15\frac{1}{c}$, $OA = 2$, $AB = 6$, $OA \perp AB$,
 $BC = 5$, $R = 4$, $\operatorname{tg} \beta = 4/3$.

Задача K17.23.

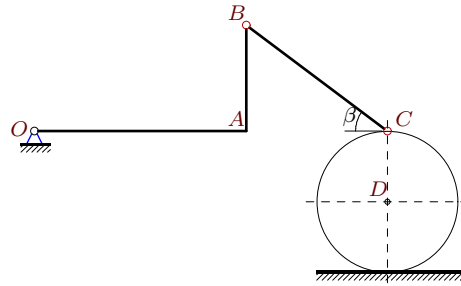
5



$\omega_{OA_z} = 14\frac{1}{c}$, $OA = 4$, $AB = 5$, $OA \perp AB$,
 $BC = 10$, $DC = 13$, $\operatorname{tg} \beta = 4/3$, $\operatorname{tg} \alpha = 12/5$

Задача K17.24.

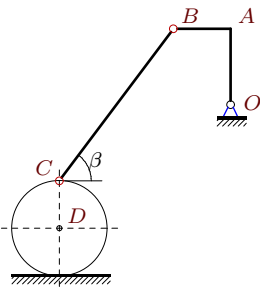
5



$\omega_{DC_z} = 15\frac{1}{c}$, $OA = 6$, $AB = 3$, $OA \perp AB$,
 $BC = 5$, $R = 2$, $\operatorname{tg} \beta = 3/4$.

Задача K17.25.

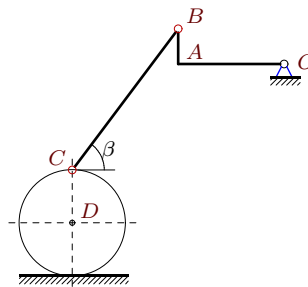
5



$\omega_{DC_z} = 16\frac{1}{c}$, $OA = 4$, $AB = 3$, $OA \perp AB$,
 $BC = 10$, $R = 2.5$, $\operatorname{tg} \beta = 4/3$.

Задача K17.26.

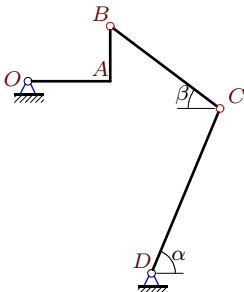
5



$\omega_{OA_z} = 3\frac{1}{c}$, $OA = 6$, $AB = 2$, $OA \perp AB$,
 $BC = 10$, $R = 3$, $\operatorname{tg} \beta = 4/3$.

Задача K17.27.

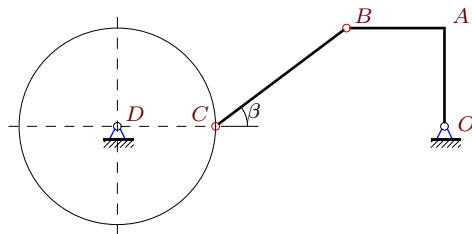
5



$\omega_{OA_z} = 63\frac{1}{c}$, $OA = 6$, $AB = 4$, $OA \perp AB$,
 $BC = 10$, $DC = 13$, $\operatorname{tg} \beta = 3/4$, $\operatorname{tg} \alpha = 12/5$

Задача K17.28.

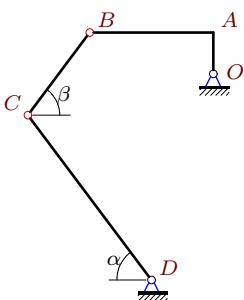
5



$\omega_{DC_z} = 7\frac{1}{c}$, $OA = AB = 3$, $OA \perp AB$,
 $BC = 5$, $R = 3$, $\operatorname{tg} \beta = 3/4$.

Задача K17.29.

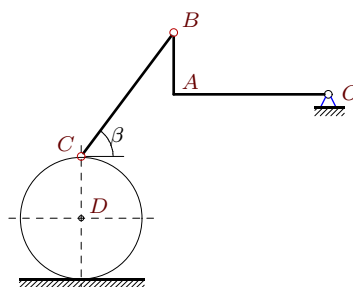
5



$\omega_{DC_z} = 5\frac{1}{c}$, $OA = 2$, $AB = 6$, $OA \perp AB$,
 $BC = 5$, $DC = 10$, $\operatorname{tg} \alpha = \operatorname{tg} \beta = 4/3$

Задача K17.30.

5



$\omega_{DC_z} = 13\frac{1}{c}$, $OA = 5$, $AB = 2$, $OA \perp AB$,
 $BC = 5$, $R = 2$, $\operatorname{tg} \beta = 4/3$.

К17 Ответы.**Скорости точек простого механизма (3 звена).**

22.03.2012

№	ω_{OAz}	ω_{BCz}	ω_{CDz}	v_A	v_B	v_C
1	—	—1	1	4	5	6
2	—6	—	20	18	40.25	60
3	—	—62	26	126	398.45	338
4	—	—9	25	36	60	75
5	—	—5	6	20	25	30
6	—8	—4	—	16	35.78	44
7	—	—23	11	63	159.93	143
8	10	—	12	20	36.06	60
9	5	—	12	20	36.06	60
10	28	—	17	112	201.91	221
11	—	—15	29	100	116.62	145
12	—	—69	74	784	852.97	962
13	—8	—2	—	16	43.08	52
14	4	—	7	16	22.63	28
15	—	—19	20	126	281.74	260
16	—	—2	13	12	37.95	52
17	—	—25	32	60	96.05	160
18	—	—7	12	42	70	84
19	—4	—3	—	12	16.97	21
20	—	—4	9	12	23.32	36
21	8	—4	—	32	35.78	44
22	—8	—4	—	16	50.6	60
23	—	—5	8	56	89.64	104
24	8	—12	—	48	53.67	60
25	10	—5	—	40	50	80
26	—	—3	5	18	18.97	30
27	—	—26	34	378	454.3	442
28	—3	—3	—	9	12.73	21
29	8	—6	—	16	50.6	50
30	6	—10	—	30	32.31	52

К17 файл о17к5А