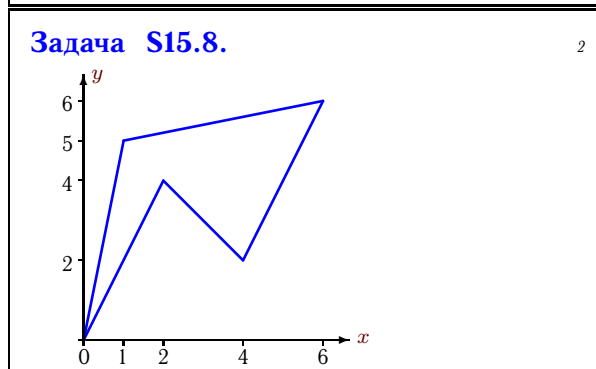
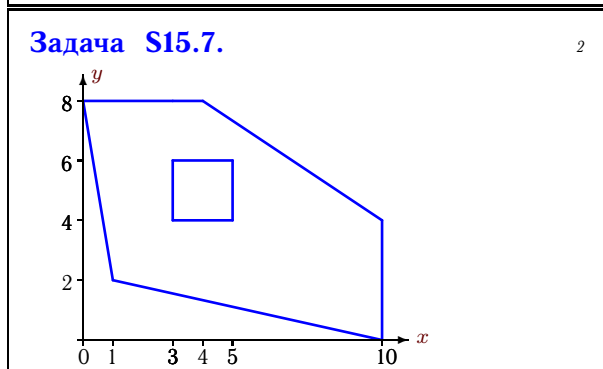
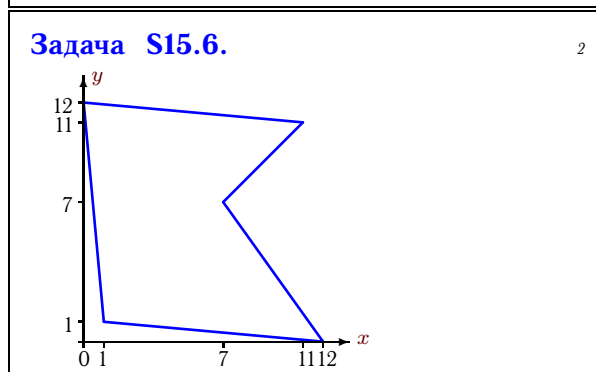
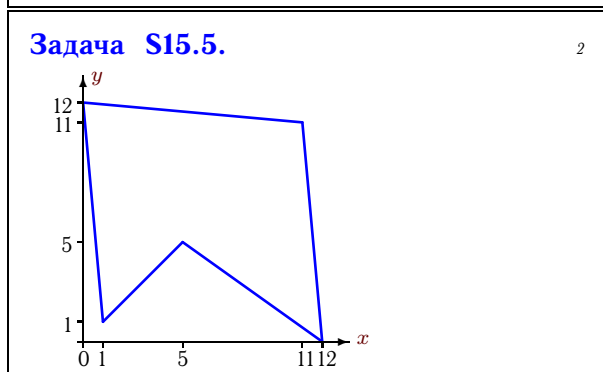
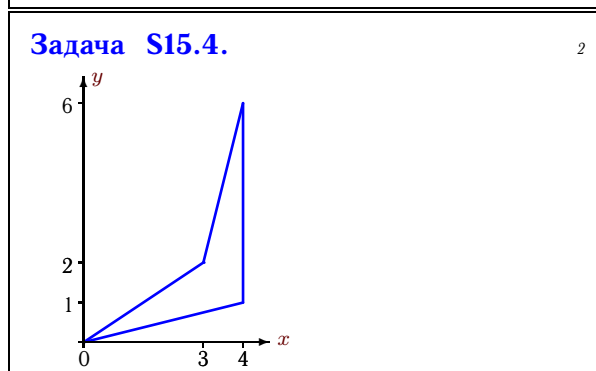
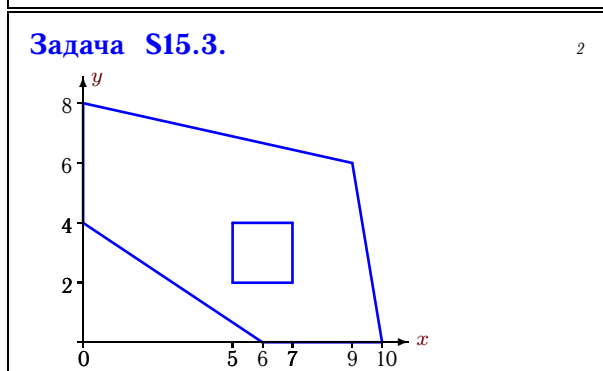
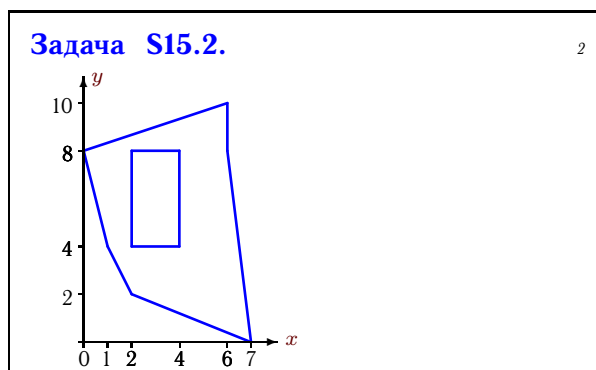
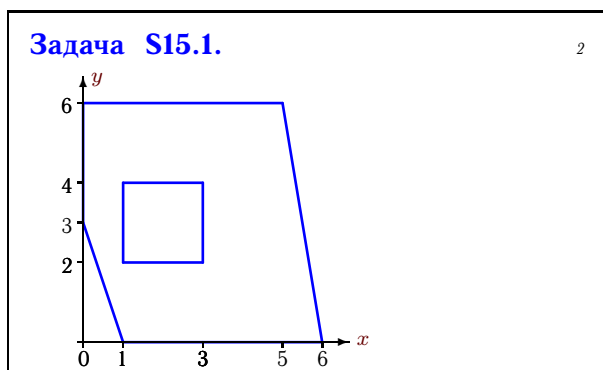


Геометрические характеристики плоской фигуры

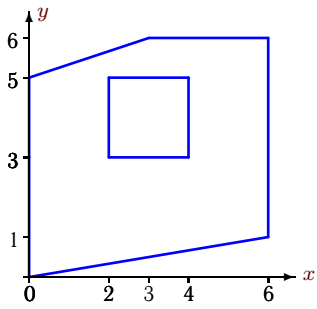
Найти площадь (в см^2) и координаты центра тяжести плоской фигуры (в см).
Отметки на осях даны в сантиметрах.

Кирсанов М.Н. **Решебник. Теоретическая механика**/Под ред. А. И. Кириллова.– М.: ФИЗМАТЛИТ, 2008. — 384 с. (с.118.)



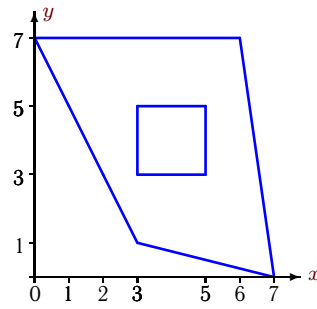
Задача S15.9.

2



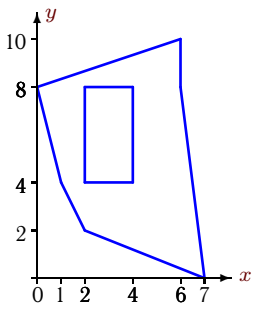
Задача S15.10.

2



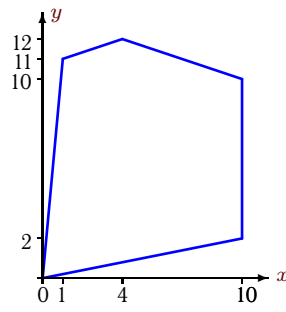
Задача S15.11.

2



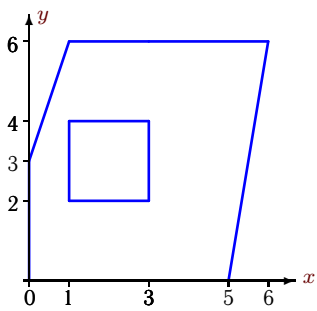
Задача S15.12.

2



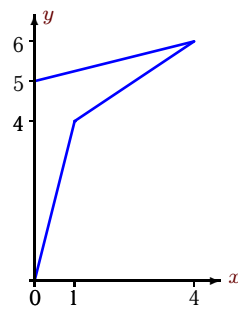
Задача S15.13.

2



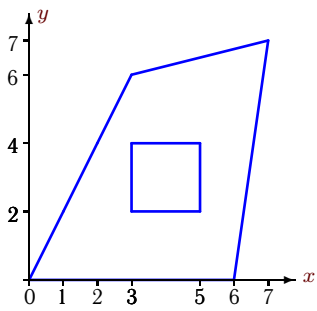
Задача S15.14.

2



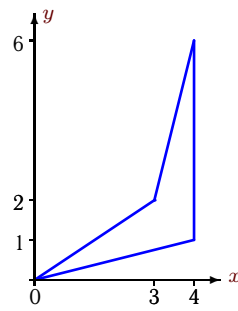
Задача S15.15.

2



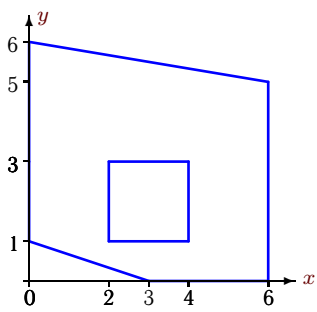
Задача S15.16.

2



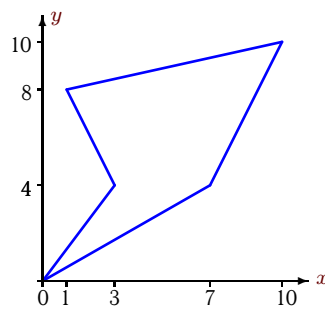
Задача S15.17.

2



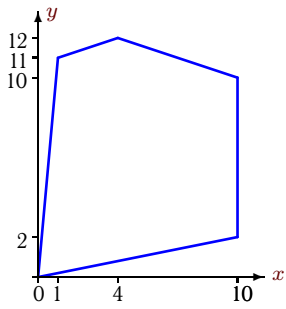
Задача S15.18.

2



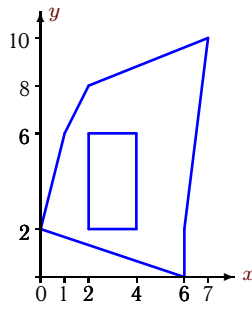
Задача S15.19.

2



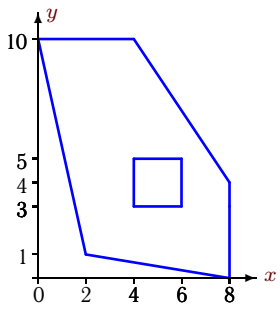
Задача S15.20.

2



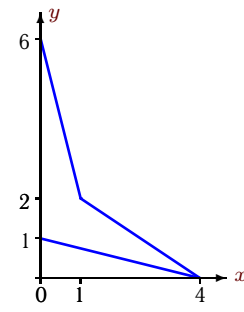
Задача S15.21.

2



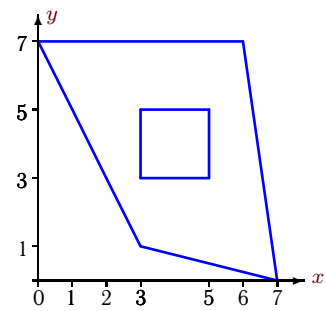
Задача S15.22.

2



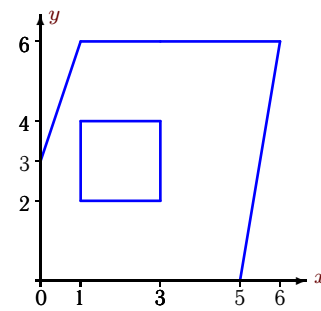
Задача S15.23.

2



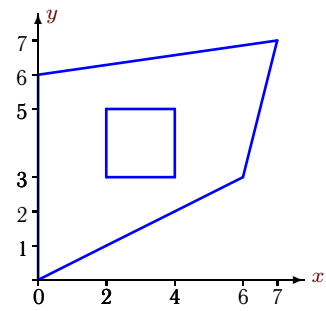
Задача S15.24.

2



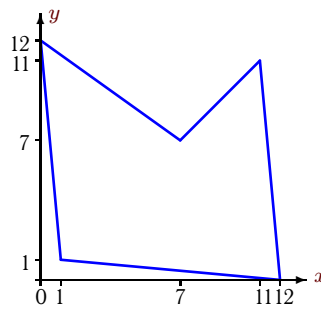
Задача S15.25.

2



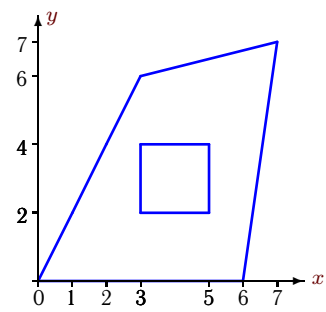
Задача S15.26.

2



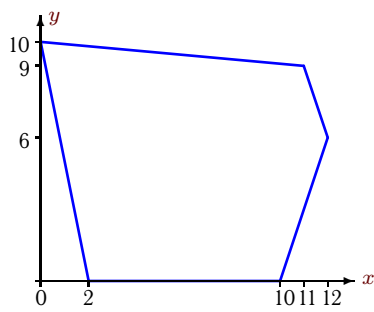
Задача S15.27.

2



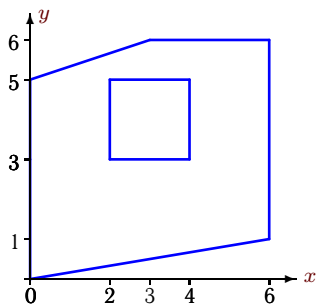
Задача S15.28.

2



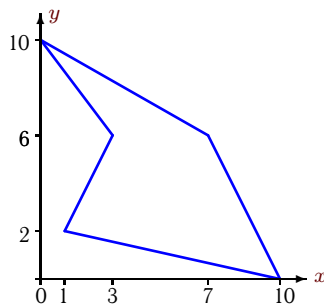
Задача S15.29.

2



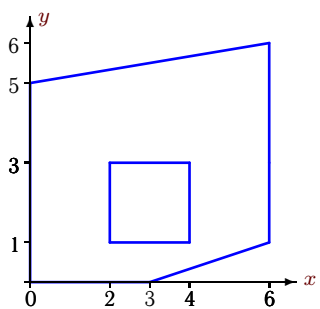
Задача S15.30.

2



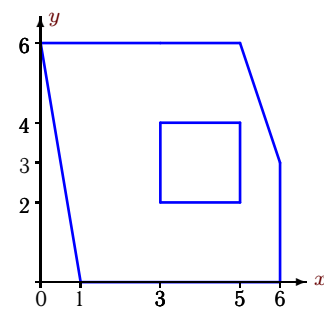
Задача S15.31.

2



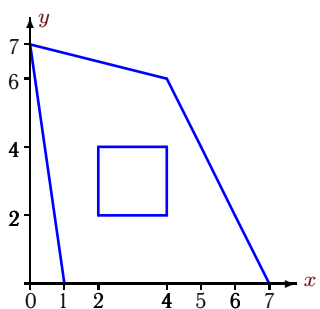
Задача S15.32.

2



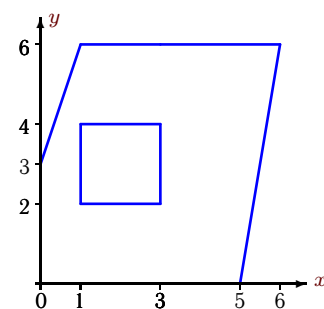
Задача S15.33.

2



Задача S15.34.

2



S15 Ответы.**Геометрические характеристики плоской фигуры**

16.07.2012

№	A	x_c	y_c
1	27.50	3.00	3.00
2	36.00	4.00	5.00
3	50.00	5.00	4.00
4	5.00	3.00	2.00
5	96.00	6.00	7.00
6	96.00	5.00	6.00
7	50.00	5.00	4.00
8	12.00	3.00	4.00
9	27.50	3.00	3.00
10	27.50	4.00	4.00
11	36.00	4.00	5.00
12	96.00	5.00	6.00
13	27.50	3.00	3.00
14	5.00	1.00	4.00
15	27.50	4.00	3.00
16	5.00	3.00	2.00
17	27.50	3.00	3.00
18	40.00	5.00	6.00
19	96.00	5.00	6.00
20	36.00	4.00	5.00
21	50.00	4.00	5.00
22	5.00	1.00	2.00
23	27.50	4.00	4.00
24	27.50	3.00	3.00
25	27.50	3.00	4.00
26	96.00	6.00	5.00
27	27.50	4.00	3.00
28	96.00	6.00	5.00
29	27.50	3.00	3.00
30	40.00	5.00	4.00
31	27.50	3.00	3.00
32	27.50	3.00	3.00
33	27.50	3.00	3.00
34	27.50	3.00	3.00

S15 файл o15s2A