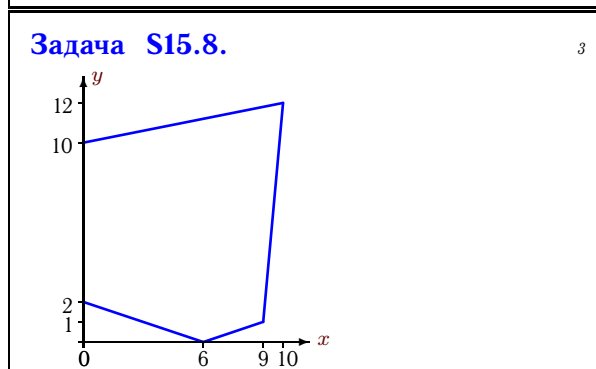
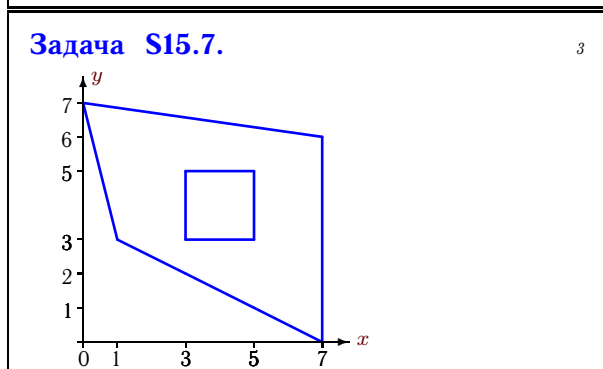
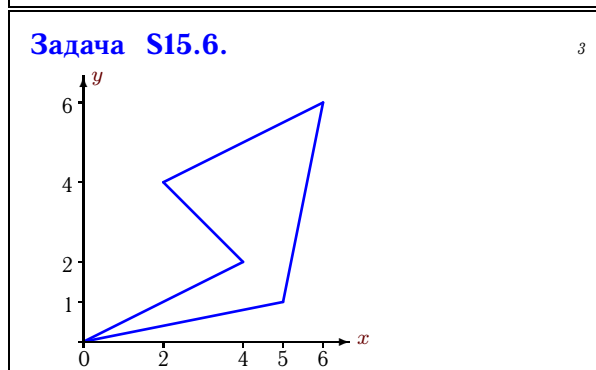
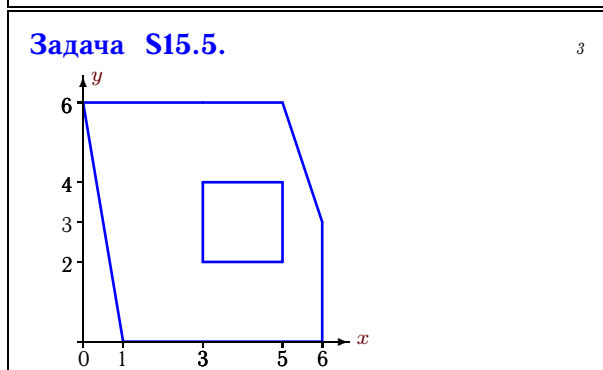
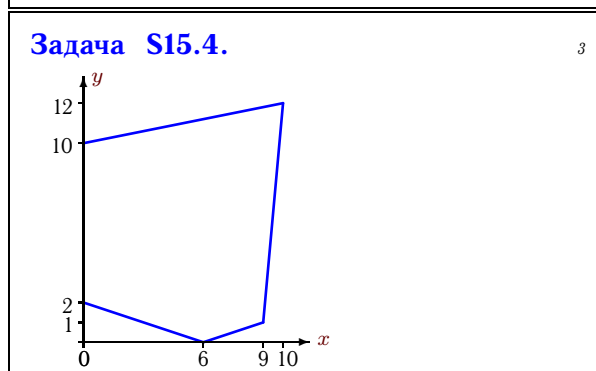
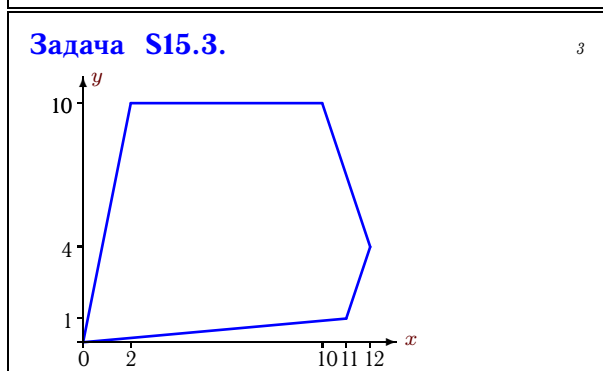
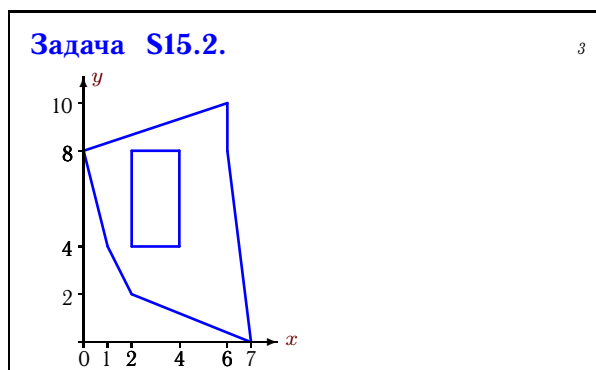
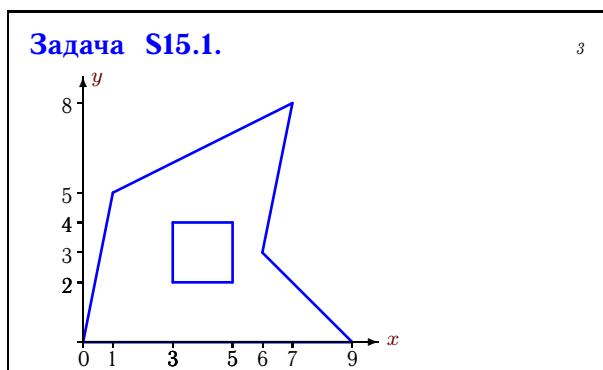


Геометрические характеристики плоской фигуры

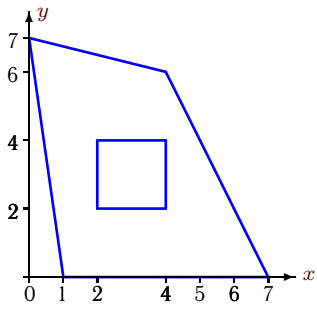
Найти площадь (в см^2) и координаты центра тяжести плоской фигуры (в см).
Отметки на осях даны в сантиметрах.

Кирсанов М.Н. **Решбник. Теоретическая механика**/Под ред. А. И. Кириллова.– М.: ФИЗМАТЛИТ, 2008. — 384 с. (с.118.)



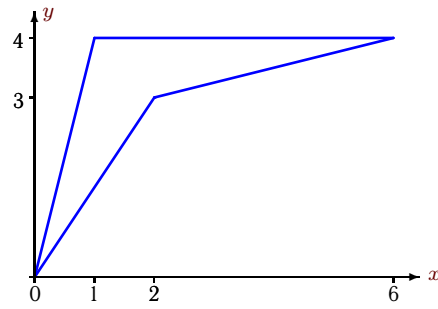
Задача S15.9.

3



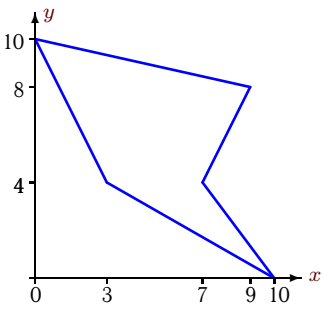
Задача S15.10.

3



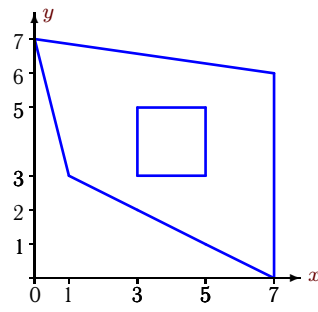
Задача S15.11.

3



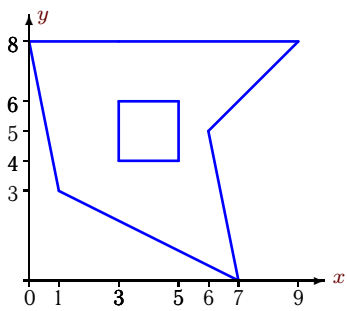
Задача S15.12.

3



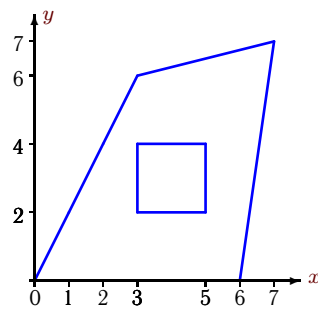
Задача S15.13.

3



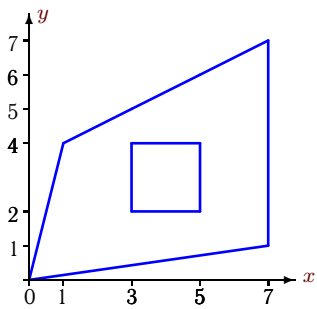
Задача S15.14.

3



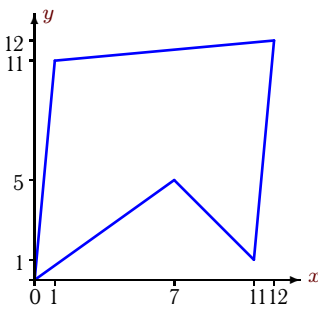
Задача S15.15.

3



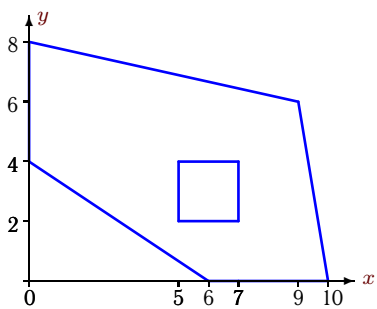
Задача S15.16.

3



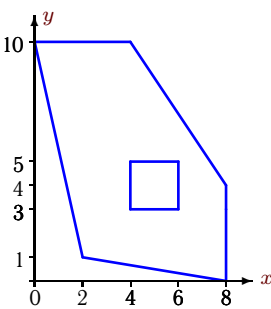
Задача S15.17.

3



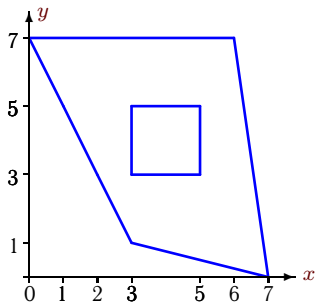
Задача S15.18.

3



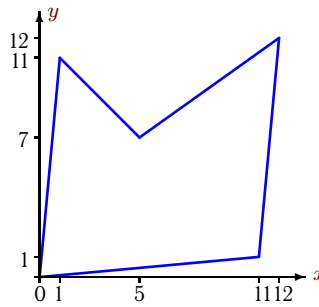
Задача S15.19.

3



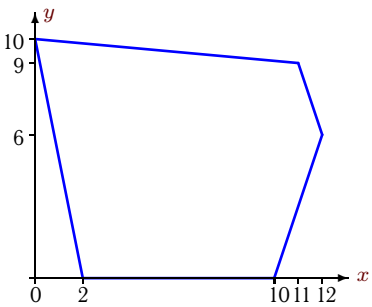
Задача S15.20.

3



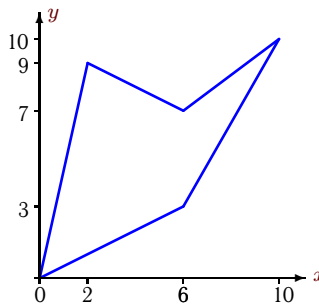
Задача S15.21.

3



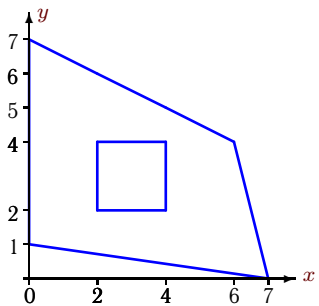
Задача S15.22.

3



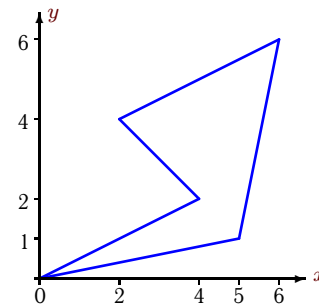
Задача S15.23.

3



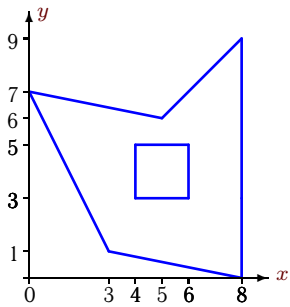
Задача S15.24.

3



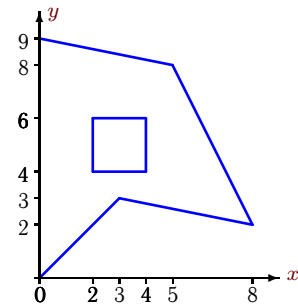
Задача S15.25.

3



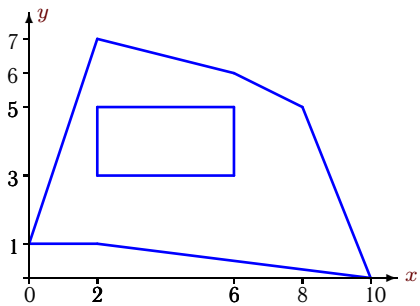
Задача S15.26.

3



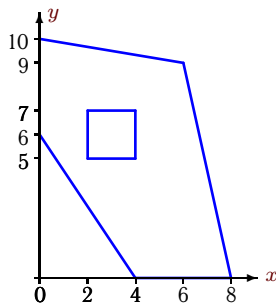
Задача S15.27.

3



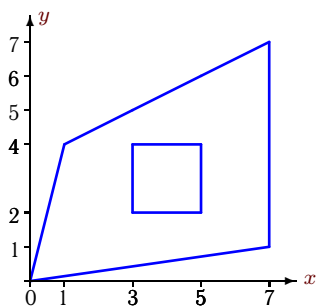
Задача S15.28.

3



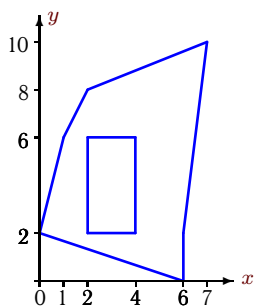
Задача S15.29.

3



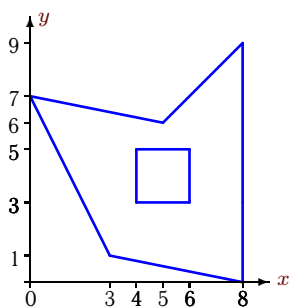
Задача S15.30.

3



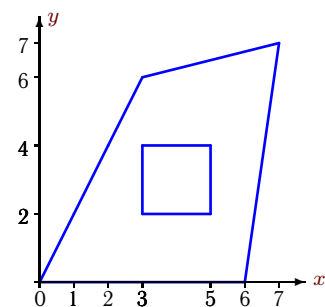
Задача S15.31.

3



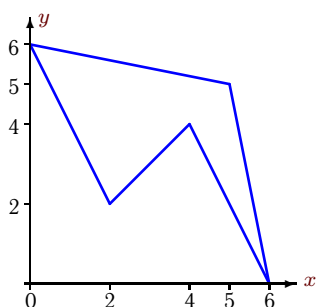
Задача S15.32.

3



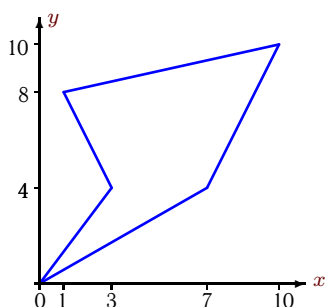
Задача S15.33.

3



Задача S15.34.

3



S15 Ответы.**Геометрические характеристики плоской фигуры**

16.07.2012

№	A	x_c	y_c
1	36.50	4.00	3.00
2	36.00	4.00	5.00
3	96.00	6.00	5.00
4	96.00	5.00	6.00
5	27.50	3.00	3.00
6	12.00	4.00	3.00
7	27.50	4.00	4.00
8	96.00	5.00	6.00
9	27.50	3.00	3.00
10	5.00	2.00	3.00
11	40.00	5.00	6.00
12	27.50	4.00	4.00
13	36.50	4.00	5.00
14	27.50	4.00	3.00
15	27.50	4.00	3.00
16	96.00	6.00	7.00
17	50.00	5.00	4.00
18	50.00	4.00	5.00
19	27.50	4.00	4.00
20	96.00	6.00	5.00
21	96.00	6.00	5.00
22	40.00	4.00	5.00
23	27.50	3.00	3.00
24	12.00	4.00	3.00
25	36.50	5.00	4.00
26	36.50	3.00	5.00
27	36.00	5.00	3.00
28	50.00	4.00	5.00
29	27.50	4.00	3.00
30	36.00	4.00	5.00
31	36.50	5.00	4.00
32	27.50	4.00	3.00
33	12.00	3.00	4.00
34	40.00	5.00	6.00

S15 файл o15s3A