

## Размещение вершин графа на линейке

Найти наилучшее размещение графа на линейке после трех циклов генетического алгоритма. Качество размещения оценивается суммой<sup>1</sup>

$$L = \sum_i^5 \sum_j^5 d_{ij} a_{ij},$$

где  $d_{ij}$  — расстояние (в ребрах) по линейке между вершинами  $v_i$  и  $v_j$ ,  $a_{ij}$  — соответствующий элемент матрицы смежности (0 или 1). На каждом этапе  $k = 1, 2, 3$  эволюции на хромосому  $h_i = [v_1, v_2, \dots, v_5]$  с лучшим качеством действует оператор мутации  $R_k$  инверсионного типа, генерирующий хромосому  $h'_i = [v_1, v_2, \dots, v_k, v_5, \dots, v_{k+1}]$ . Хромосома с худшим качеством удаляется из популяции. Найти  $\min L$ . При равных качествах хромосом предпочтение отдается хромосоме с меньшим номером.

**Задача 15.1.** 3

1) 

1	2	3	4	5
---	---	---	---	---

2) 

2	1	3	4	5
---	---	---	---	---

3) 

5	2	3	4	1
---	---	---	---	---

**Задача 15.2.** 3

1) 

1	2	3	4	5
---	---	---	---	---

2) 

2	1	3	4	5
---	---	---	---	---

3) 

5	2	3	4	1
---	---	---	---	---

**Задача 15.3.** 3

1) 

1	2	3	4	5
---	---	---	---	---

2) 

2	1	3	4	5
---	---	---	---	---

3) 

5	2	3	4	1
---	---	---	---	---

**Задача 15.4.** 3

1) 

1	2	3	4	5
---	---	---	---	---

2) 

1	3	2	4	5
---	---	---	---	---

3) 

1	5	3	4	2
---	---	---	---	---

**Задача 15.5.** 3

1) 

1	2	3	4	5
---	---	---	---	---

2) 

2	1	3	4	5
---	---	---	---	---

3) 

5	2	3	4	1
---	---	---	---	---

**Задача 15.6.** 3

1) 

1	2	3	4	5
---	---	---	---	---

2) 

2	1	3	4	5
---	---	---	---	---

3) 

5	2	3	4	1
---	---	---	---	---

**Задача 15.7.** 3

1) 

1	2	3	4	5
---	---	---	---	---

2) 

1	3	2	4	5
---	---	---	---	---

3) 

1	5	3	4	2
---	---	---	---	---

**Задача 15.8.** 3

1) 

1	2	3	4	5
---	---	---	---	---

2) 

1	3	2	4	5
---	---	---	---	---

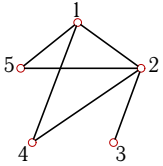
3) 

1	5	3	4	2
---	---	---	---	---

<sup>1</sup>Емельянов В.В., Курейчик В.М., Курейчик В.В. Теория и практика эволюционного моделирования. — М.: ФИЗМАТЛИТ, 2003

**Задача 15.9.**

3



- 1) 

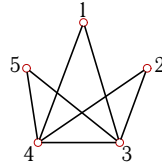
1	2	3	4	5
---	---	---	---	---
- 2) 

2	1	3	4	5
---	---	---	---	---
- 3) 

5	2	3	4	1
---	---	---	---	---

**Задача 15.10.**

3



- 1) 

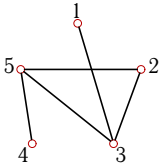
1	2	3	4	5
---	---	---	---	---
- 2) 

2	1	3	4	5
---	---	---	---	---
- 3) 

1	5	3	4	2
---	---	---	---	---

**Задача 15.11.**

3



- 1) 

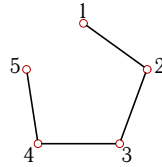
1	2	3	4	5
---	---	---	---	---
- 2) 

2	1	3	4	5
---	---	---	---	---
- 3) 

1	5	3	4	2
---	---	---	---	---

**Задача 15.12.**

3



- 1) 

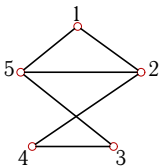
1	2	3	4	5
---	---	---	---	---
- 2) 

2	1	3	4	5
---	---	---	---	---
- 3) 

5	2	3	4	1
---	---	---	---	---

**Задача 15.13.**

3



- 1) 

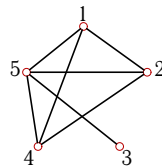
1	2	3	4	5
---	---	---	---	---
- 2) 

1	3	2	4	5
---	---	---	---	---
- 3) 

5	2	3	4	1
---	---	---	---	---

**Задача 15.14.**

3



- 1) 

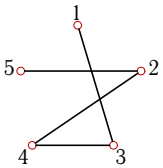
1	2	3	4	5
---	---	---	---	---
- 2) 

2	1	3	4	5
---	---	---	---	---
- 3) 

5	2	3	4	1
---	---	---	---	---

**Задача 15.15.**

3



- 1) 

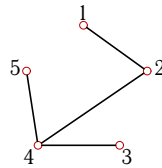
1	2	3	4	5
---	---	---	---	---
- 2) 

2	1	3	4	5
---	---	---	---	---
- 3) 

5	2	3	4	1
---	---	---	---	---

**Задача 15.16.**

3



- 1) 

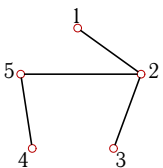
1	2	3	4	5
---	---	---	---	---
- 2) 

2	1	3	4	5
---	---	---	---	---
- 3) 

1	5	3	4	2
---	---	---	---	---

**Задача 15.17.**

3



- 1) 

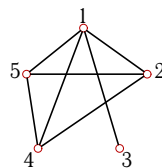
1	2	3	4	5
---	---	---	---	---
- 2) 

2	1	3	4	5
---	---	---	---	---
- 3) 

1	5	3	4	2
---	---	---	---	---

**Задача 15.18.**

3



- 1) 

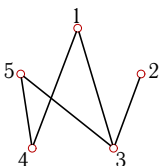
1	2	3	4	5
---	---	---	---	---
- 2) 

2	1	3	4	5
---	---	---	---	---
- 3) 

1	5	3	4	2
---	---	---	---	---

**Задача 15.19.**

3



- 1) 

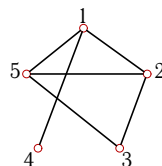
1	2	3	4	5
---	---	---	---	---
- 2) 

2	1	3	4	5
---	---	---	---	---
- 3) 

1	5	3	4	2
---	---	---	---	---

**Задача 15.20.**

3



- 1) 

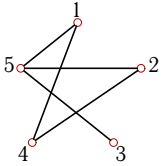
1	2	3	4	5
---	---	---	---	---
- 2) 

2	1	3	4	5
---	---	---	---	---
- 3) 

5	2	3	4	1
---	---	---	---	---

**Задача 15.21.**

3



- 1) 

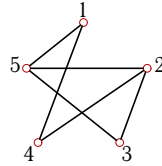
1	2	3	4	5
---	---	---	---	---
- 2) 

2	1	3	4	5
---	---	---	---	---
- 3) 

1	5	3	4	2
---	---	---	---	---

**Задача 15.22.**

3



- 1) 

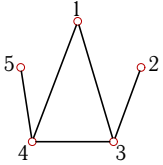
1	2	3	4	5
---	---	---	---	---
- 2) 

2	1	3	4	5
---	---	---	---	---
- 3) 

5	2	3	4	1
---	---	---	---	---

**Задача 15.23.**

3



- 1) 

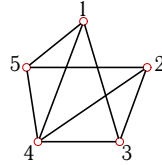
1	2	3	4	5
---	---	---	---	---
- 2) 

1	3	2	4	5
---	---	---	---	---
- 3) 

5	2	3	4	1
---	---	---	---	---

**Задача 15.24.**

3



- 1) 

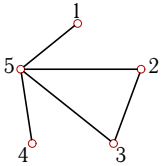
1	2	3	4	5
---	---	---	---	---
- 2) 

2	1	3	4	5
---	---	---	---	---
- 3) 

5	2	3	4	1
---	---	---	---	---

**Задача 15.25.**

3



- 1) 

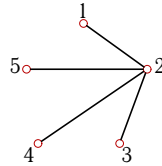
1	2	3	4	5
---	---	---	---	---
- 2) 

1	3	2	4	5
---	---	---	---	---
- 3) 

5	2	3	4	1
---	---	---	---	---

**Задача 15.26.**

3



- 1) 

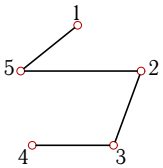
1	2	3	4	5
---	---	---	---	---
- 2) 

2	1	3	4	5
---	---	---	---	---
- 3) 

1	5	3	4	2
---	---	---	---	---

**Задача 15.27.**

3



- 1) 

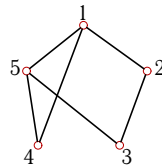
1	2	3	4	5
---	---	---	---	---
- 2) 

1	3	2	4	5
---	---	---	---	---
- 3) 

1	5	3	4	2
---	---	---	---	---

**Задача 15.28.**

3



- 1) 

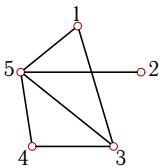
1	2	3	4	5
---	---	---	---	---
- 2) 

2	1	3	4	5
---	---	---	---	---
- 3) 

5	2	3	4	1
---	---	---	---	---

**Задача 15.29.**

3



- 1) 

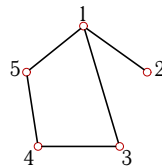
1	2	3	4	5
---	---	---	---	---
- 2) 

2	1	3	4	5
---	---	---	---	---
- 3) 

5	2	3	4	1
---	---	---	---	---

**Задача 15.30.**

3



- 1) 

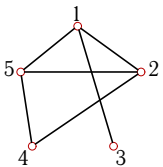
1	2	3	4	5
---	---	---	---	---
- 2) 

2	1	3	4	5
---	---	---	---	---
- 3) 

5	2	3	4	1
---	---	---	---	---

**Задача 15.31.**

3



- 1) 

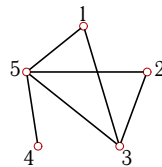
1	2	3	4	5
---	---	---	---	---
- 2) 

2	1	3	4	5
---	---	---	---	---
- 3) 

5	2	3	4	1
---	---	---	---	---

**Задача 15.32.**

3



- 1) 

1	2	3	4	5
---	---	---	---	---
- 2) 

2	1	3	4	5
---	---	---	---	---
- 3) 

1	5	3	4	2
---	---	---	---	---

**Размещение вершин графа на линейке**

	0	1	2	3	min $L$	seq
1	31	29	29	26	7	5 -2 -3 -4 -1
2	34	34	33	33	11	1 -2 -3 -4 -5
3	36	33	31	29	9	5 -2 -1 -3 -4
4	30	28	27	27	9	1 -2 -5 -3 -4
5	27	23	22	21	6	5 -1 -4 -3 -2
6	41	37	33	33	11	5 -1 -2 -3 -4
7	33	31	31	30	9	1 -2 -3 -4 -5
8	34	31	26	23	6	1 -2 -5 -3 -4
9	41	38	34	31	9	5 -1 -2 -4 -3
10	36	36	36	36	12	1 -2 -3 -4 -5
11	29	29	29	26	7	1 -2 -3 -5 -4
12	17	16	15	14	4	1 -2 -3 -4 -5
13	40	39	35	31	9	1 -2 -5 -4 -3
14	48	47	46	43	13	1 -5 -2 -4 -3
15	23	23	20	18	6	5 -2 -1 -4 -3
16	19	19	16	16	5	1 -2 -3 -4 -5
17	25	23	20	17	5	1 -2 -3 -5 -4
18	47	45	43	40	12	2 -5 -1 -4 -3
19	27	26	26	25	8	2 -1 -3 -4 -5
20	40	39	37	35	11	5 -2 -1 -3 -4
21	37	34	29	28	9	1 -5 -2 -4 -3
22	42	38	36	34	11	5 -2 -3 -4 -1
23	24	24	24	24	8	1 -2 -3 -4 -5
24	49	46	45	43	14	5 -1 -4 -3 -2
25	33	30	27	25	8	1 -5 -2 -3 -4
26	27	27	24	21	7	1 -2 -3 -4 -5
27	25	25	21	16	4	1 -5 -2 -3 -4
28	37	37	34	32	10	2 -1 -3 -5 -4
29	38	34	30	28	9	2 -5 -1 -3 -4
30	29	26	23	21	7	2 -1 -3 -4 -5
31	41	40	37	36	11	1 -2 -5 -4 -3
32	37	37	37	34	10	1 -5 -3 -2 -4