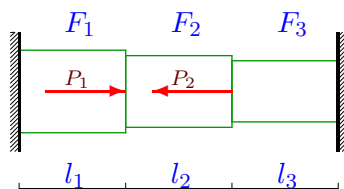


Напряженное состояние зажатого бруса

Найти реакции опор стального прямого призматического бруса кусочно-постоянного сечения, закрепленного по концам. К брусу приложены силы P_1, P_2 . Построить эпюры продольных сил, нормальных напряжений, относительных удлинений и горизонтальных смещений. Модуль упругости материала $E = 2 \cdot 10^5$ МПа.

Задача 17.1.



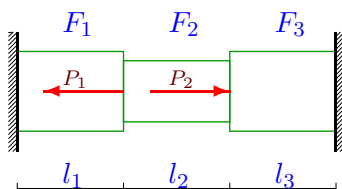
$$P_1 = 77 \text{ кН}, P_2 = 37 \text{ кН},$$

$$F_1 = 31 \text{ см}^2, F_2 = 27 \text{ см}^2,$$

$$F_3 = 23 \text{ см}^2,$$

$$l_1 = 3 \text{ м}, l_2 = 2 \text{ м}, l_3 = 3 \text{ м}.$$

Задача 17.2.



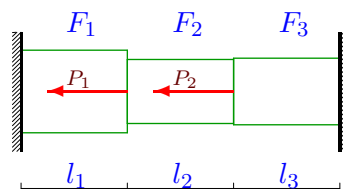
$$P_1 = 160 \text{ кН}, P_2 = 190 \text{ кН},$$

$$F_1 = 30 \text{ см}^2, F_2 = 23 \text{ см}^2,$$

$$F_3 = 30 \text{ см}^2,$$

$$l_1 = 2 \text{ м}, l_2 = 4 \text{ м}, l_3 = 3 \text{ м}.$$

Задача 17.3.



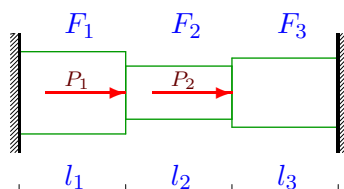
$$P_1 = 66 \text{ кН}, P_2 = 70 \text{ кН},$$

$$F_1 = 31 \text{ см}^2, F_2 = 24 \text{ см}^2,$$

$$F_3 = 25 \text{ см}^2,$$

$$l_1 = 2 \text{ м}, l_2 = 2 \text{ м}, l_3 = 3 \text{ м}.$$

Задача 17.4.



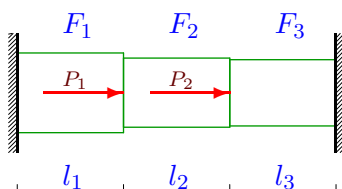
$$P_1 = 38 \text{ кН}, P_2 = 120 \text{ кН},$$

$$F_1 = 31 \text{ см}^2, F_2 = 20 \text{ см}^2,$$

$$F_3 = 26 \text{ см}^2,$$

$$l_1 = 3 \text{ м}, l_2 = 3 \text{ м}, l_3 = 4 \text{ м}.$$

Задача 17.5.



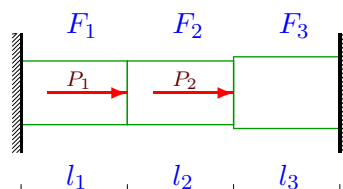
$$P_1 = 39 \text{ кН}, P_2 = 156 \text{ кН},$$

$$F_1 = 30 \text{ см}^2, F_2 = 26 \text{ см}^2,$$

$$F_3 = 25 \text{ см}^2,$$

$$l_1 = 3 \text{ м}, l_2 = 3 \text{ м}, l_3 = 3 \text{ м}.$$

Задача 17.6.



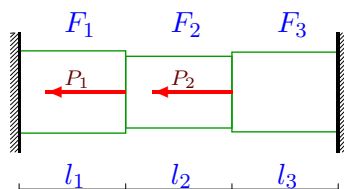
$$P_1 = 72 \text{ кН}, P_2 = 35 \text{ кН},$$

$$F_1 = 24 \text{ см}^2, F_2 = 24 \text{ см}^2,$$

$$F_3 = 27 \text{ см}^2,$$

$$l_1 = 3 \text{ м}, l_2 = 3 \text{ м}, l_3 = 3 \text{ м}.$$

Задача 17.7.



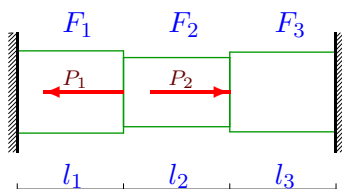
$$P_1 = 32 \text{ кН}, P_2 = 117 \text{ кН},$$

$$F_1 = 31 \text{ см}^2, F_2 = 27 \text{ см}^2,$$

$$F_3 = 30 \text{ см}^2,$$

$$l_1 = 2 \text{ м}, l_2 = 2 \text{ м}, l_3 = 3 \text{ м}.$$

Задача 17.8.



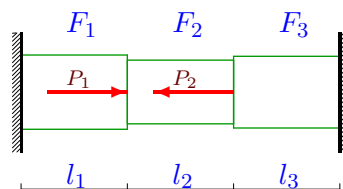
$$P_1 = 144 \text{ кН}, P_2 = 35 \text{ кН},$$

$$F_1 = 31 \text{ см}^2, F_2 = 26 \text{ см}^2,$$

$$F_3 = 30 \text{ см}^2,$$

$$l_1 = 2 \text{ м}, l_2 = 3 \text{ м}, l_3 = 3 \text{ м}.$$

Задача 17.9.



$$P_1 = 77 \text{ кН}, P_2 = 80 \text{ кН},$$

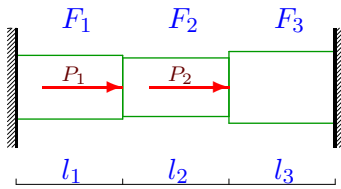
$$F_1 = 28 \text{ см}^2, F_2 = 24 \text{ см}^2,$$

$$F_3 = 27 \text{ см}^2,$$

$$l_1 = 3 \text{ м}, l_2 = 2 \text{ м}, l_3 = 4 \text{ м}.$$

Задача 17.10.

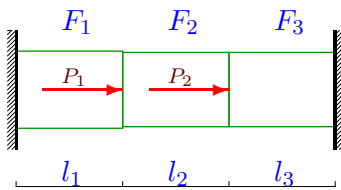
2



$P_1 = 78\text{кН}, P_2 = 128\text{кН},$
 $F_1 = 24\text{см}^2, F_2 = 22\text{см}^2,$
 $F_3 = 27\text{см}^2,$
 $l_1 = 3\text{м}, l_2 = 3\text{м}, l_3 = 2\text{м}.$

Задача 17.13.

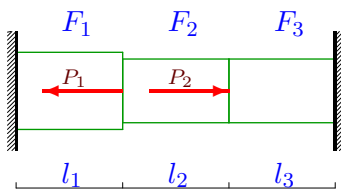
2



$P_1 = 160\text{кН}, P_2 = 200\text{кН},$
 $F_1 = 29\text{см}^2, F_2 = 28\text{см}^2,$
 $F_3 = 28\text{см}^2,$
 $l_1 = 3\text{м}, l_2 = 4\text{м}, l_3 = 4\text{м}.$

Задача 17.16.

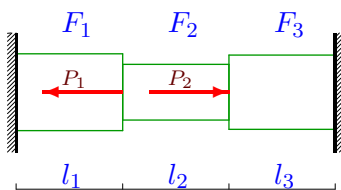
2



$P_1 = 152\text{кН}, P_2 = 108\text{кН},$
 $F_1 = 29\text{см}^2, F_2 = 24\text{см}^2,$
 $F_3 = 24\text{см}^2,$
 $l_1 = 2\text{м}, l_2 = 3\text{м}, l_3 = 3\text{м}.$

Задача 17.19.

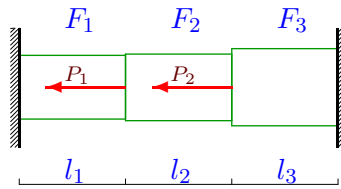
2



$P_1 = 140\text{кН}, P_2 = 77\text{кН},$
 $F_1 = 29\text{см}^2, F_2 = 21\text{см}^2,$
 $F_3 = 28\text{см}^2,$
 $l_1 = 2\text{м}, l_2 = 3\text{м}, l_3 = 3\text{м}.$

Задача 17.11.

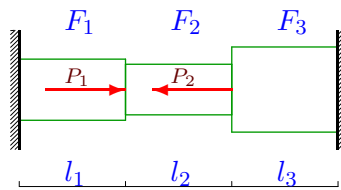
2



$P_1 = 99\text{кН}, P_2 = 80\text{кН},$
 $F_1 = 24\text{см}^2, F_2 = 25\text{см}^2,$
 $F_3 = 29\text{см}^2,$
 $l_1 = 2\text{м}, l_2 = 2\text{м}, l_3 = 4\text{м}.$

Задача 17.14.

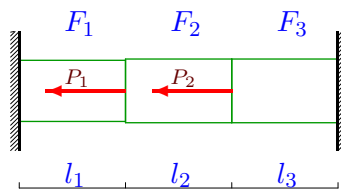
2



$P_1 = 93\text{кН}, P_2 = 128\text{кН},$
 $F_1 = 23\text{см}^2, F_2 = 19\text{см}^2,$
 $F_3 = 32\text{см}^2,$
 $l_1 = 3\text{м}, l_2 = 2\text{м}, l_3 = 2\text{м}.$

Задача 17.17.

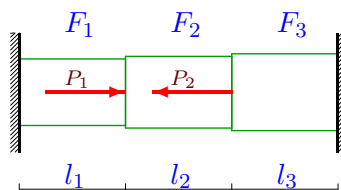
2



$P_1 = 102\text{кН}, P_2 = 31\text{кН},$
 $F_1 = 23\text{см}^2, F_2 = 24\text{см}^2,$
 $F_3 = 24\text{см}^2,$
 $l_1 = 2\text{м}, l_2 = 2\text{м}, l_3 = 2\text{м}.$

Задача 17.20.

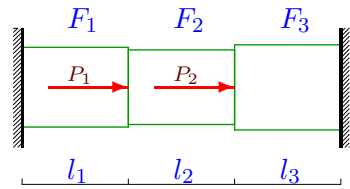
2



$P_1 = 68\text{кН}, P_2 = 32\text{кН},$
 $F_1 = 25\text{см}^2, F_2 = 27\text{см}^2,$
 $F_3 = 29\text{см}^2,$
 $l_1 = 3\text{м}, l_2 = 2\text{м}, l_3 = 2\text{м}.$

Задача 17.12.

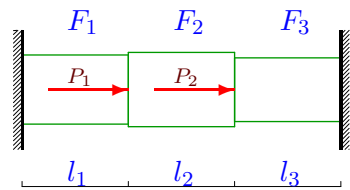
2



$P_1 = 77\text{кН}, P_2 = 195\text{кН},$
 $F_1 = 30\text{см}^2, F_2 = 28\text{см}^2,$
 $F_3 = 32\text{см}^2,$
 $l_1 = 3\text{м}, l_2 = 4\text{м}, l_3 = 3\text{м}.$

Задача 17.15.

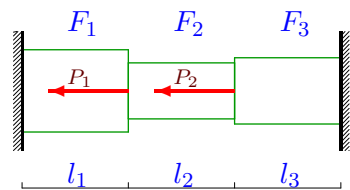
2



$P_1 = 39\text{кН}, P_2 = 144\text{кН},$
 $F_1 = 26\text{см}^2, F_2 = 28\text{см}^2,$
 $F_3 = 24\text{см}^2,$
 $l_1 = 3\text{м}, l_2 = 3\text{м}, l_3 = 3\text{м}.$

Задача 17.18.

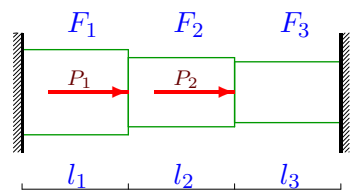
2



$P_1 = 68\text{кН}, P_2 = 31\text{кН},$
 $F_1 = 31\text{см}^2, F_2 = 21\text{см}^2,$
 $F_3 = 25\text{см}^2,$
 $l_1 = 2\text{м}, l_2 = 2\text{м}, l_3 = 2\text{м}.$

Задача 17.21.

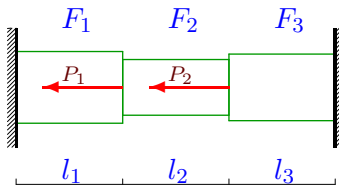
2



$P_1 = 185\text{кН}, P_2 = 74\text{кН},$
 $F_1 = 32\text{см}^2, F_2 = 26\text{см}^2,$
 $F_3 = 23\text{см}^2,$
 $l_1 = 4\text{м}, l_2 = 3\text{м}, l_3 = 3\text{м}.$

Задача 17.22.

2



$$P_1 = 102 \text{ кН}, P_2 = 31 \text{ кН},$$

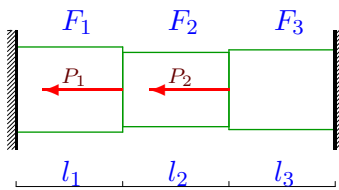
$$F_1 = 27 \text{ см}^2, F_2 = 21 \text{ см}^2,$$

$$F_3 = 25 \text{ см}^2,$$

$$l_1 = 2 \text{ м}, l_2 = 2 \text{ м}, l_3 = 2 \text{ м}.$$

Задача 17.25.

2



$$P_1 = 96 \text{ кН}, P_2 = 102 \text{ кН},$$

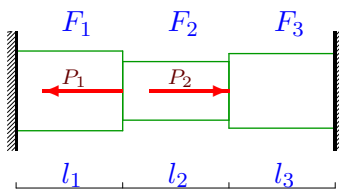
$$F_1 = 32 \text{ см}^2, F_2 = 28 \text{ см}^2,$$

$$F_3 = 30 \text{ см}^2,$$

$$l_1 = 2 \text{ м}, l_2 = 2 \text{ м}, l_3 = 2 \text{ м}.$$

Задача 17.28.

2



$$P_1 = 108 \text{ кН}, P_2 = 36 \text{ кН},$$

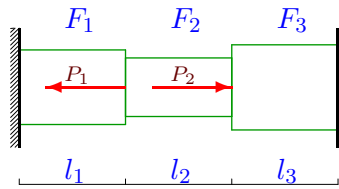
$$F_1 = 30 \text{ см}^2, F_2 = 22 \text{ см}^2,$$

$$F_3 = 28 \text{ см}^2,$$

$$l_1 = 2 \text{ м}, l_2 = 3 \text{ м}, l_3 = 3 \text{ м}.$$

Задача 17.23.

2



$$P_1 = 80 \text{ кН}, P_2 = 185 \text{ кН},$$

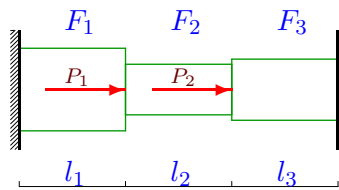
$$F_1 = 28 \text{ см}^2, F_2 = 22 \text{ см}^2,$$

$$F_3 = 32 \text{ см}^2,$$

$$l_1 = 2 \text{ м}, l_2 = 4 \text{ м}, l_3 = 3 \text{ м}.$$

Задача 17.26.

2



$$P_1 = 111 \text{ кН}, P_2 = 74 \text{ кН},$$

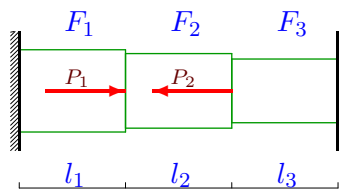
$$F_1 = 31 \text{ см}^2, F_2 = 19 \text{ см}^2,$$

$$F_3 = 23 \text{ см}^2,$$

$$l_1 = 3 \text{ м}, l_2 = 3 \text{ м}, l_3 = 3 \text{ м}.$$

Задача 17.29.

2



$$P_1 = 34 \text{ кН}, P_2 = 38 \text{ кН},$$

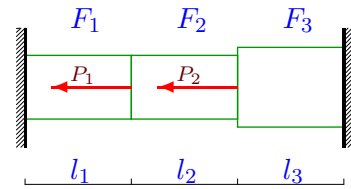
$$F_1 = 31 \text{ см}^2, F_2 = 28 \text{ см}^2,$$

$$F_3 = 24 \text{ см}^2,$$

$$l_1 = 3 \text{ м}, l_2 = 2 \text{ м}, l_3 = 3 \text{ м}.$$

Задача 17.24.

2



$$P_1 = 99 \text{ кН}, P_2 = 72 \text{ кН},$$

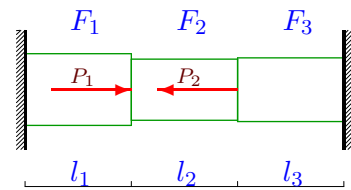
$$F_1 = 24 \text{ см}^2, F_2 = 24 \text{ см}^2,$$

$$F_3 = 30 \text{ см}^2,$$

$$l_1 = 2 \text{ м}, l_2 = 2 \text{ м}, l_3 = 3 \text{ м}.$$

Задача 17.27.

2



$$P_1 = 96 \text{ кН}, P_2 = 96 \text{ кН},$$

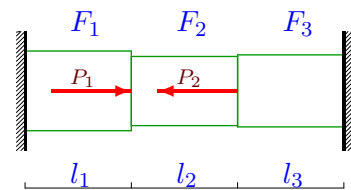
$$F_1 = 27 \text{ см}^2, F_2 = 23 \text{ см}^2,$$

$$F_3 = 24 \text{ см}^2,$$

$$l_1 = 3 \text{ м}, l_2 = 2 \text{ м}, l_3 = 2 \text{ м}.$$

Задача 17.30.

2



$$P_1 = 77 \text{ кН}, P_2 = 38 \text{ кН},$$

$$F_1 = 30 \text{ см}^2, F_2 = 26 \text{ см}^2,$$

$$F_3 = 27 \text{ см}^2,$$

$$l_1 = 3 \text{ м}, l_2 = 2 \text{ м}, l_3 = 3 \text{ м}.$$

Напряженное состояние зажатого бруса

№	R_A	δ_1	δ_2
	кН	мм	
1	36.249	0.175	0.024
2	-72.894	-0.243	0.514
3	-81.464	-0.263	-0.327
4	74.903	0.362	0.639
5	83.188	0.416	0.671
6	57.846	0.362	0.273
7	-72.385	-0.234	-0.383
8	-98.304	-0.317	-0.053
9	17.637	0.094	-0.153
10	77.199	0.482	0.477
11	-108.243	-0.451	-0.488
12	108.435	0.542	0.767
13	190.886	0.987	1.208
14	25.493	0.166	-0.189
15	77.846	0.449	0.657
16	-76.811	-0.265	0.205
17	-77.214	-0.336	-0.232
18	-60.046	-0.194	-0.156
19	-83.865	-0.289	0.112
20	28.588	0.172	0.026
21	148.667	0.929	0.720
22	-81.642	-0.302	-0.205
23	-13.550	-0.048	0.556
24	-95.062	-0.396	-0.380
25	-99.988	-0.312	-0.327
26	108.170	0.523	0.501
27	29.665	0.165	-0.124
28	-72.352	-0.241	0.002
29	6.578	0.032	-0.066
30	35.608	0.178	0.019