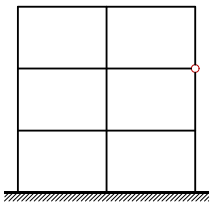
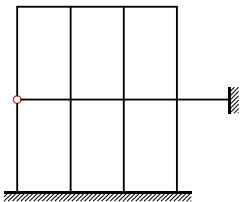
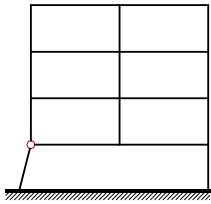
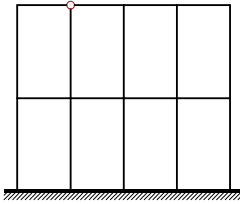
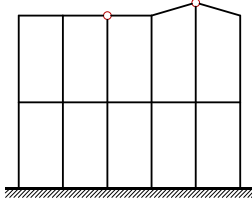
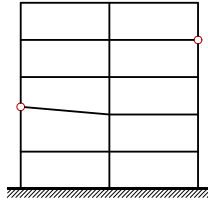
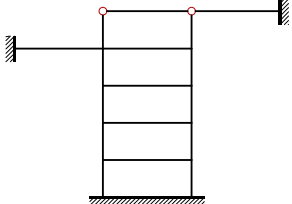
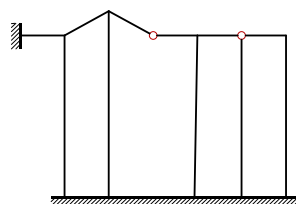
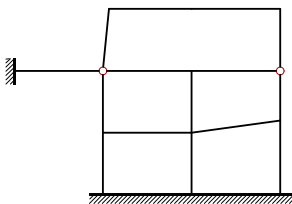
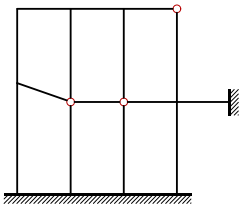
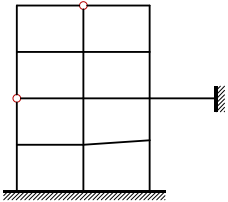
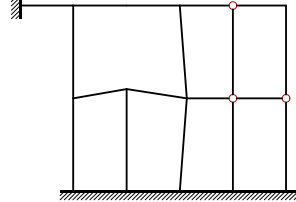


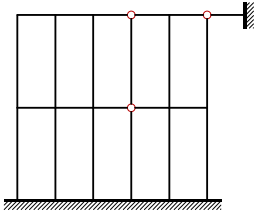
# Число неизвестных по методу сил и методу перемещений

Определить число неизвестных в раме при расчете по методу сил и по методу перемещений.

<p><b>Задача 34.1.</b> <span style="float: right;">2</span></p> 	<p><b>Задача 34.2.</b> <span style="float: right;">2</span></p> 
<p><b>Задача 34.3.</b> <span style="float: right;">2</span></p> 	<p><b>Задача 34.4.</b> <span style="float: right;">2</span></p> 
<p><b>Задача 34.5.</b> <span style="float: right;">2</span></p> 	<p><b>Задача 34.6.</b> <span style="float: right;">2</span></p> 
<p><b>Задача 34.7.</b> <span style="float: right;">2</span></p> 	<p><b>Задача 34.8.</b> <span style="float: right;">2</span></p> 
<p><b>Задача 34.9.</b> <span style="float: right;">2</span></p> 	<p><b>Задача 34.10.</b> <span style="float: right;">2</span></p> 
<p><b>Задача 34.11.</b> <span style="float: right;">2</span></p> 	<p><b>Задача 34.12.</b> <span style="float: right;">2</span></p> 

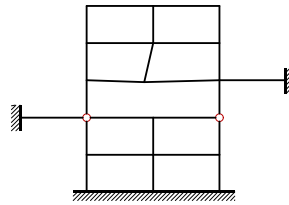
Задача 34.13.

2



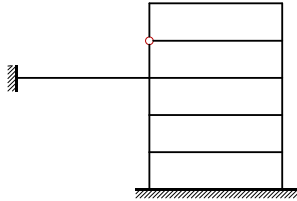
Задача 34.14.

2



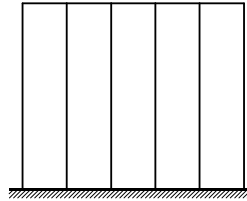
Задача 34.15.

2



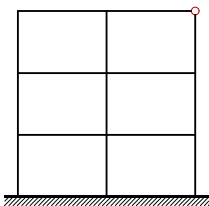
Задача 34.16.

2



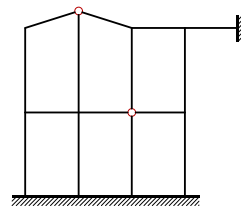
Задача 34.17.

2



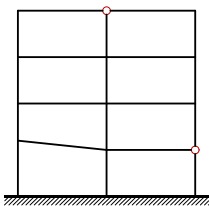
Задача 34.18.

2



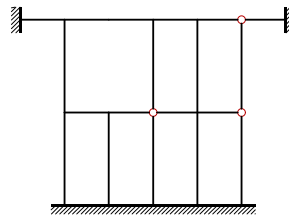
Задача 34.19.

2



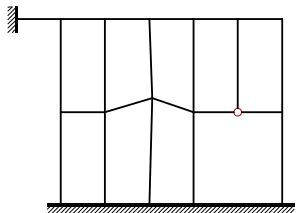
Задача 34.20.

2



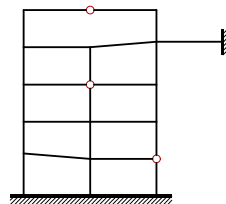
Задача 34.21.

2



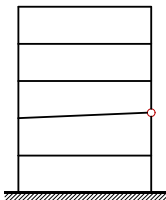
Задача 34.22.

2



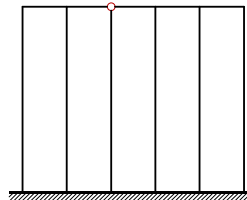
Задача 34.23.

2



Задача 34.24.

2



### Число неизвестных по методу сил и методу перемещений

№	Метод перемещений			Метод сил $N_F$
	$N_{\text{лин}}$	$N_{\text{узн}}$	$N_{\varepsilon}$	
1	3	8	11	16
2	1	7	8	19
3	5	11	16	19
4	2	9	11	22
5	2	10	12	26
6	5	13	18	26
7	3	8	11	18
8	0	3	3	12
9	2	6	8	13
10	1	5	6	14
11	3	10	13	23
12	1	6	7	17
13	1	9	10	26
14	4	13	17	28
15	4	9	13	16
16	1	6	7	15
17	3	8	11	17
18	1	6	7	16
19	4	10	14	20
20	1	6	7	20
21	2	11	13	28
22	4	11	15	24
23	5	9	14	13
24	1	5	6	13