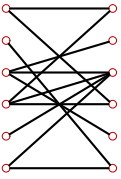


Паросочетание

Найти наибольшее паросочетание в двудольном графе. Определить число P совершенных паросочетаний.

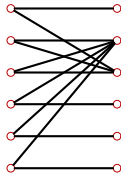
Задача 23.1.

2



Задача 23.2.

2



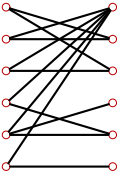
Задача 23.3.

2



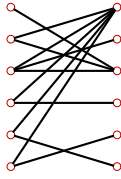
Задача 23.4.

2



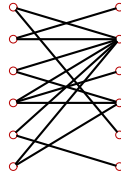
Задача 23.5.

2



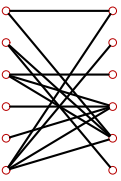
Задача 23.6.

2



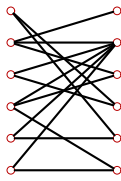
Задача 23.7.

2



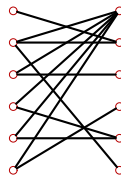
Задача 23.8.

2



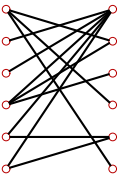
Задача 23.9.

2



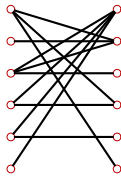
Задача 23.10.

2



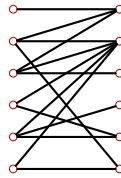
Задача 23.11.

2



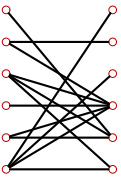
Задача 23.12.

2



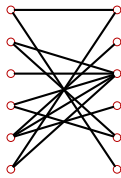
Задача 23.13.

2



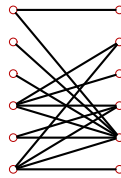
Задача 23.14.

2



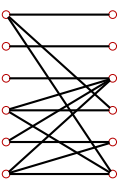
Задача 23.15.

2



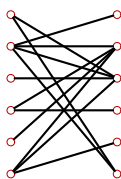
Задача 23.16.

2



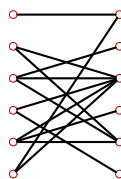
Задача 23.17.

2



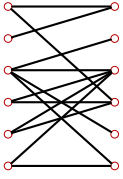
Задача 23.18.

2



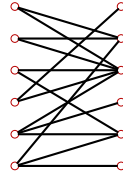
Задача 23.19.

2



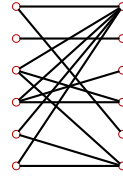
Задача 23.20.

2



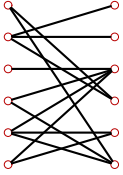
Задача 23.21.

2



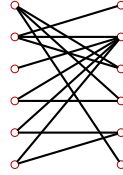
Задача 23.22.

2



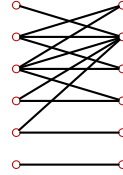
Задача 23.23.

2



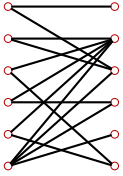
Задача 23.24.

2



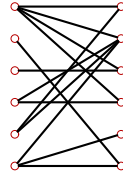
Задача 23.25.

2



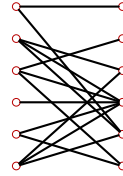
Задача 23.26.

2



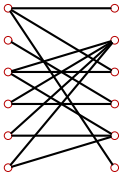
Задача 23.27.

2



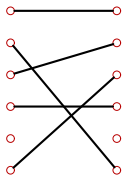
Задача 23.28.

2

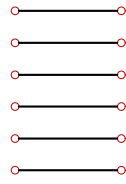


Паросочетание

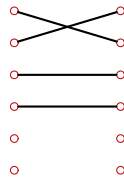
1) $P = 0$



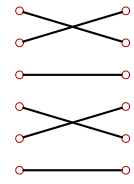
2) $P = 2$



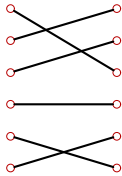
3) $P = 0$



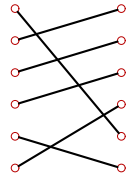
4) $P = 2$



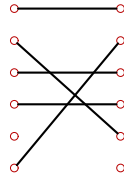
5) $P = 1$



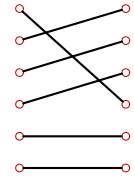
6) $P = 2$



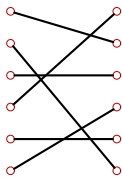
7) $P = 0$



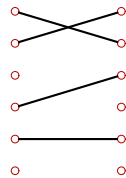
8) $P = 2$



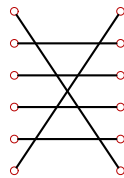
9) $P = 2$



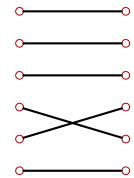
10) $P = 0$



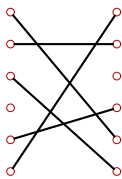
11) $P = 1$



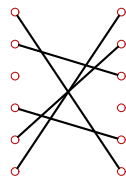
12) $P = 2$



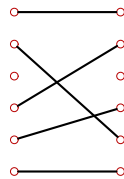
13) $P = 0$



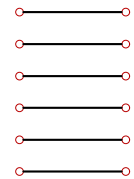
14) $P = 0$



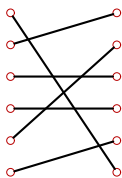
15) $P = 0$



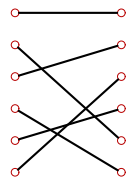
16) $P = 1$



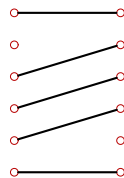
17) $P = 1$



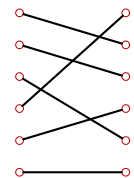
18) $P = 1$



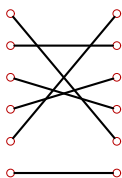
19) $P = 0$



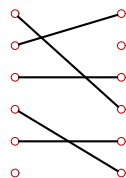
20) $P = 2$



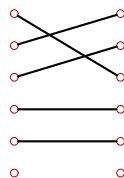
21) $P = 2$



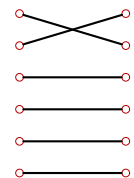
22) $P = 0$



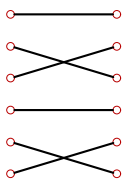
23) $P = 0$



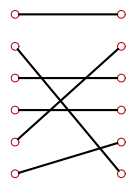
24) $P = 2$



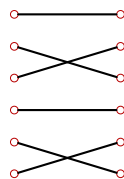
25) $P = 2$



26) $P = 3$



27) $P = 2$



28) $P = 0$

