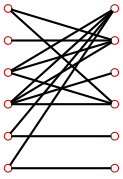


Паросочетание

Найти наибольшее паросочетание в двудольном графе. Определить число P совершенных паросочетаний.

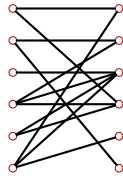
Задача 23.1.

4



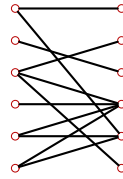
Задача 23.2.

4



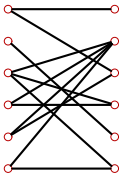
Задача 23.3.

4



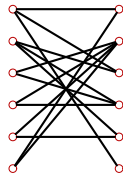
Задача 23.4.

4



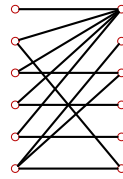
Задача 23.5.

4



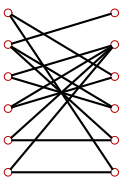
Задача 23.6.

4



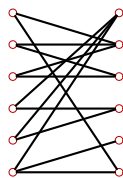
Задача 23.7.

4



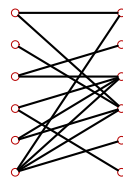
Задача 23.8.

4



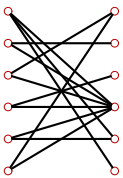
Задача 23.9.

4



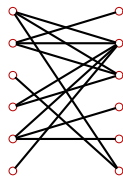
Задача 23.10.

4



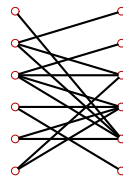
Задача 23.11.

4



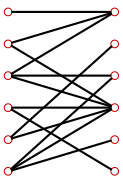
Задача 23.12.

4



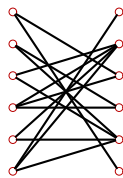
Задача 23.13.

4



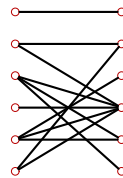
Задача 23.14.

4



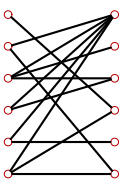
Задача 23.15.

4



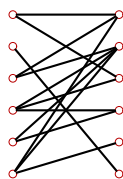
Задача 23.16.

4



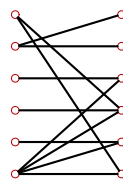
Задача 23.17.

4



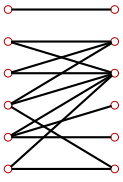
Задача 23.18.

4



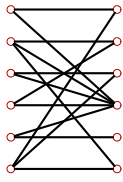
Задача 23.19.

4



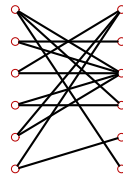
Задача 23.20.

4



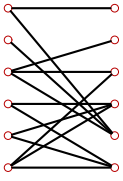
Задача 23.21.

4



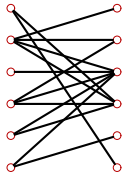
Задача 23.22.

4



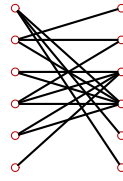
Задача 23.23.

4



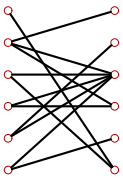
Задача 23.24.

4



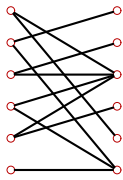
Задача 23.25.

4



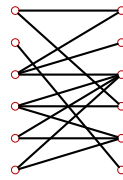
Задача 23.26.

4



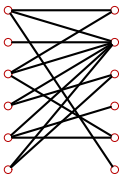
Задача 23.27.

4



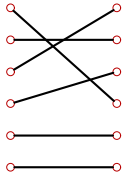
Задача 23.28.

4

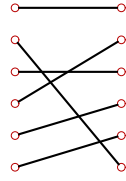


Паросочетание

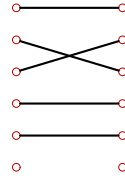
1) $P = 1$



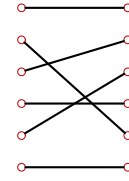
2) $P = 1$



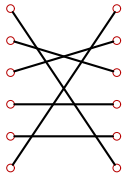
3) $P = 0$



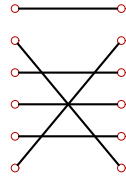
4) $P = 3$



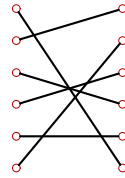
5) $P = 2$



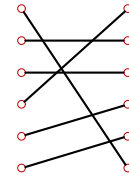
6) $P = 1$



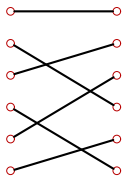
7) $P = 2$



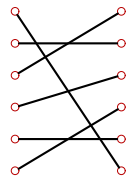
8) $P = 4$



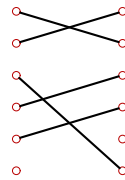
9) $P = 1$



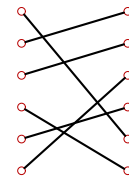
10) $P = 2$



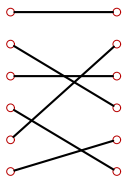
11) $P = 0$



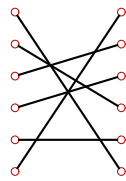
12) $P = 1$



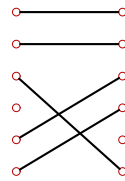
13) $P = 1$



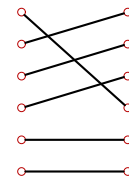
14) $P = 2$



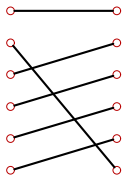
15) $P = 0$



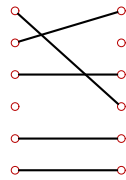
16) $P = 2$



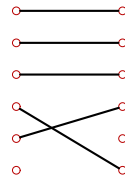
17) $P = 3$



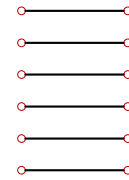
18) $P = 0$



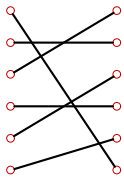
19) $P = 0$



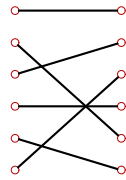
20) $P = 4$



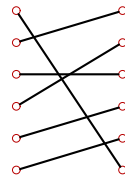
21) $P = 2$



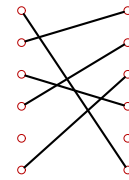
22) $P = 2$



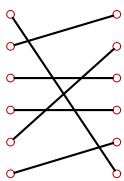
23) $P = 1$



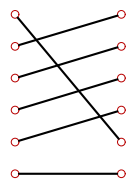
24) $P = 0$



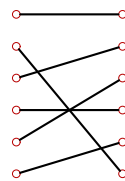
25) $P = 1$



26) $P = 1$



27) $P = 2$



28) $P = 0$

