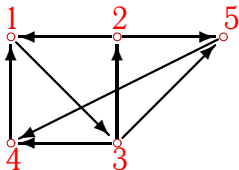
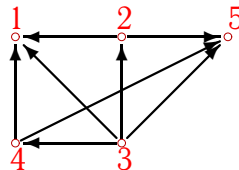
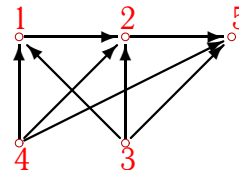
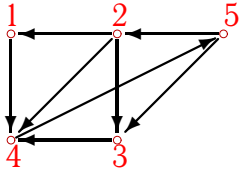
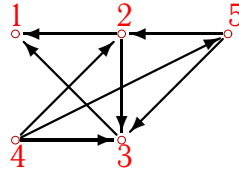
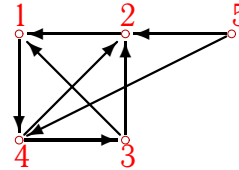
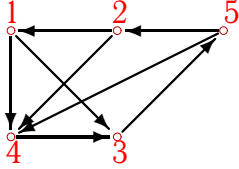
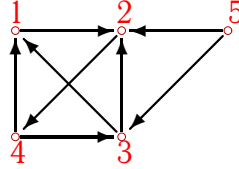
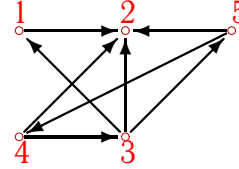
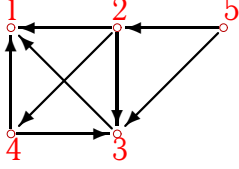
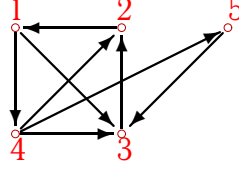
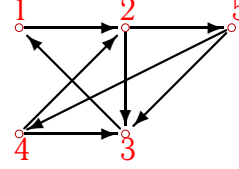
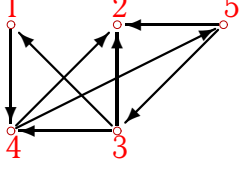
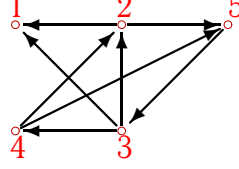
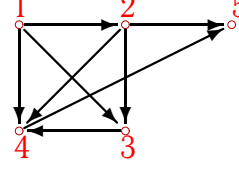
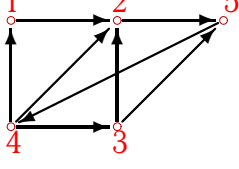
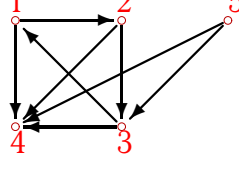
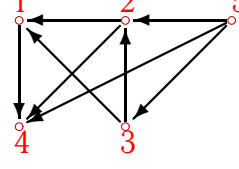
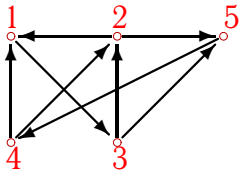


# Пути в орграфе

Сколько в графе маршрутов длины 3?

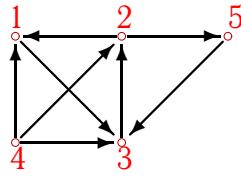
<p><b>Задача 6.1</b></p>  <p style="font-size: small; margin-top: 5px;">6.3</p>	<p><b>Задача 6.2</b></p>  <p style="font-size: small; margin-top: 5px;">6.3</p>	<p><b>Задача 6.3</b></p>  <p style="font-size: small; margin-top: 5px;">6.3</p>
<p><b>Задача 6.4</b></p>  <p style="font-size: small; margin-top: 5px;">6.3</p>	<p><b>Задача 6.5</b></p>  <p style="font-size: small; margin-top: 5px;">6.3</p>	<p><b>Задача 6.6</b></p>  <p style="font-size: small; margin-top: 5px;">6.3</p>
<p><b>Задача 6.7</b></p>  <p style="font-size: small; margin-top: 5px;">6.3</p>	<p><b>Задача 6.8</b></p>  <p style="font-size: small; margin-top: 5px;">6.3</p>	<p><b>Задача 6.9</b></p>  <p style="font-size: small; margin-top: 5px;">6.3</p>
<p><b>Задача 6.10</b></p>  <p style="font-size: small; margin-top: 5px;">6.3</p>	<p><b>Задача 6.11</b></p>  <p style="font-size: small; margin-top: 5px;">6.3</p>	<p><b>Задача 6.12</b></p>  <p style="font-size: small; margin-top: 5px;">6.3</p>
<p><b>Задача 6.13</b></p>  <p style="font-size: small; margin-top: 5px;">6.3</p>	<p><b>Задача 6.14</b></p>  <p style="font-size: small; margin-top: 5px;">6.3</p>	<p><b>Задача 6.15</b></p>  <p style="font-size: small; margin-top: 5px;">6.3</p>
<p><b>Задача 6.16</b></p>  <p style="font-size: small; margin-top: 5px;">6.3</p>	<p><b>Задача 6.17</b></p>  <p style="font-size: small; margin-top: 5px;">6.3</p>	<p><b>Задача 6.18</b></p>  <p style="font-size: small; margin-top: 5px;">6.3</p>

Задача 6.19



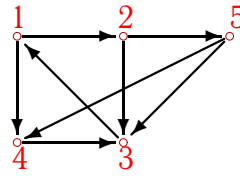
6.3

Задача 6.20



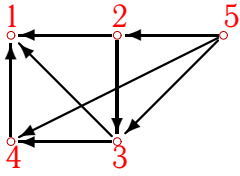
6.3

Задача 6.21



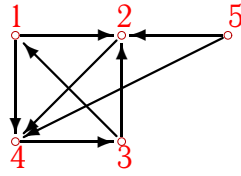
6.3

Задача 6.22



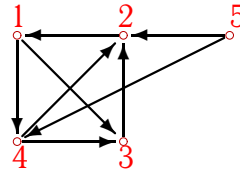
6.3

Задача 6.23



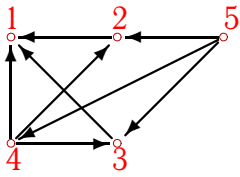
6.3

Задача 6.24



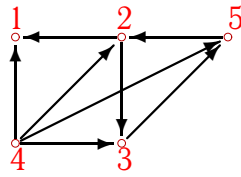
6.3

Задача 6.25



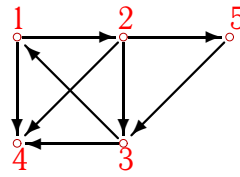
6.3

Задача 6.26



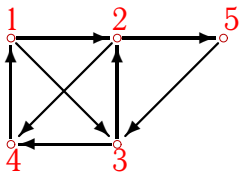
6.3

Задача 6.27



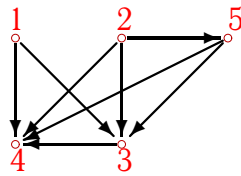
6.3

Задача 6.28



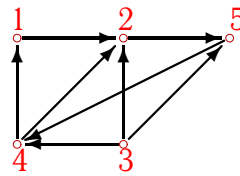
6.3

Задача 6.29



6.3

Задача 6.30



6.3

**Пути в оргграфе**

1	16
2	0
3	2
4	16
5	5
6	15
7	15
8	15
9	8
10	4
11	15
12	17
13	12
14	15
15	4
16	16
17	8
18	5
19	18
20	13
21	16
22	4
23	14
24	15
25	2
26	8
27	12
28	20
29	1
30	12