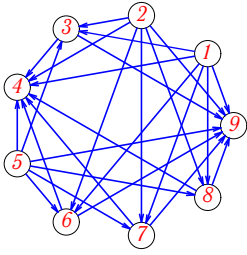


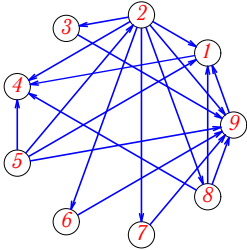
Задача G-18.11.

1



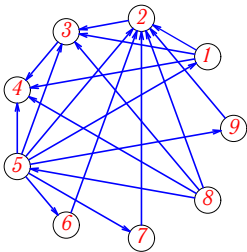
Задача G-18.13.

1



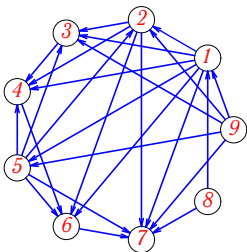
Задача G-18.15.

1



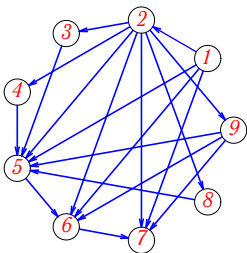
Задача G-18.17.

1



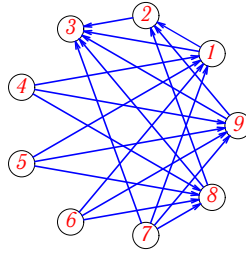
Задача G-18.19.

1



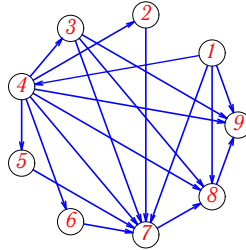
Задача G-18.12.

1



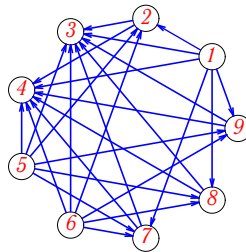
Задача G-18.14.

1



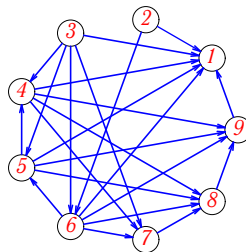
Задача G-18.16.

1



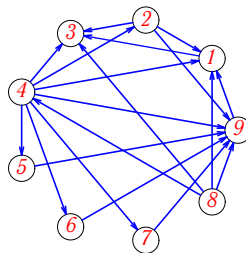
Задача G-18.18.

1



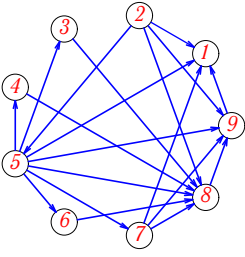
Задача G-18.20.

1



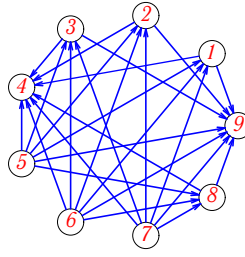
Задача G-18.21.

1



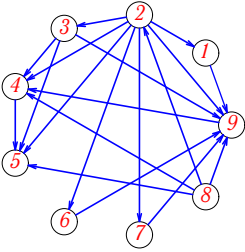
Задача G-18.22.

1



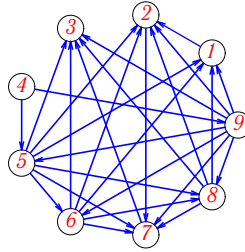
Задача G-18.23.

1



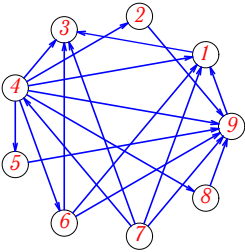
Задача G-18.24.

1



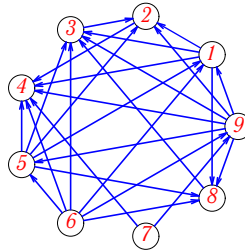
Задача G-18.25.

1



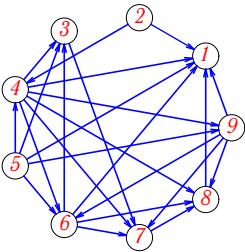
Задача G-18.26.

1



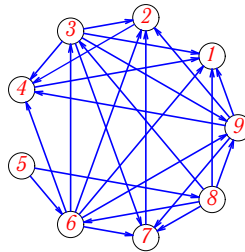
Задача G-18.27.

1



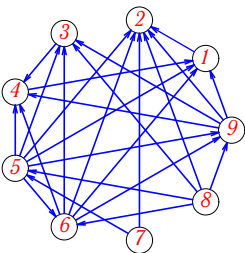
Задача G-18.28.

1



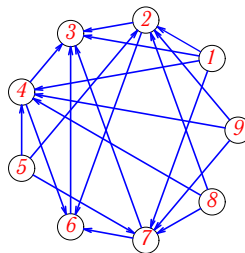
Задача G-18.29.

1



Задача G-18.30.

1



G-18

Ответы.

Топологическая сортировка бесконтурной сети

25.11.2013

1	(9,5) ,6 ,2 ,7 ,8 ,4 ,1 ,3
2	8,1,(9,4,3,2)6, 7, 5
3	4,3,(1,5,6,9)7, 2, 8
4	(1,2) ,8 ,3 ,6 ,5 ,4 ,7 ,9
5	2 , 6 , 1 , 7 , 3 , 5 , 4 , 8 , 9
6	2 , 5 , 9 , 7 , 4 , 3 , 1 , 6 , 8
7	5,4,(8,6,7,3)9, 1, 2
8	(9,2), (8,3), (6,4), (7,5), 1
9	(3,4,7,1),(9,8,2),5,6.
10	8 , 7 , 6 , 9 , 1 , 5 , 2 , 3 , 4
11	(1,5,2),(3,6,7,8),(4,9)
12	(4,5,6,7),(8,9,1),2,3.
13	5,2,(7,6,3,8)9, 1, 4
14	1,4,(5,6,2,3)7, 8, 9
15	8,5,(7,9,6,1)2, 3, 4
16	(5,1,6),(9,8,7,2),(4,3)
17	(8,9) ,1 ,5 ,2 ,3 ,4 ,6 ,7
18	(2,3) ,6 ,5 ,4 ,7 ,8 ,9 ,1
19	1,2,(3,4,8,9)5, 6, 7
20	8,4,(5,6,7,2)9, 1, 3
21	2,5,(6,3,4,7)8, 9, 1
22	(5,6,7),(3,1,2,8),(9,4)
23	8,2,(7,6,1,3)9, 4, 5
24	4 , 9 , 5 , 6 , 8 , 1 , 2 , 7 , 3
25	7,4,(2,8,5,6)9, 1, 3
26	(7,6) ,9 ,5 ,1 ,8 ,3 ,2 ,4
27	(2,5) ,4 ,9 ,6 ,3 ,7 ,8 ,1
28	5 , 8 , 6 , 3 , 9 , 7 , 2 , 4 , 1
29	(7,8) ,5 ,6 ,9 ,3 ,4 ,1 ,2
30	(9,5,8,1),(4,7,2),6,3.

G-18 файл о18г1А