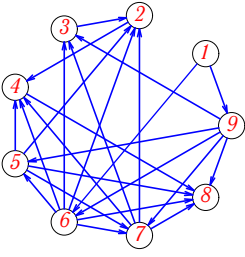


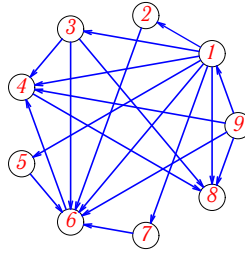
Задача G-18.11.

3



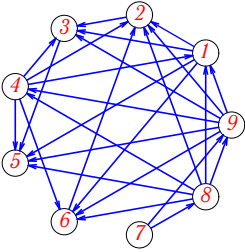
Задача G-18.12.

3



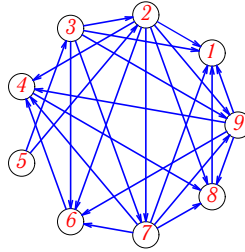
Задача G-18.13.

3



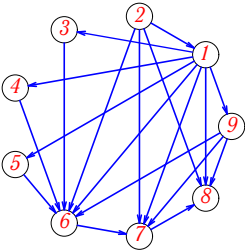
Задача G-18.14.

3



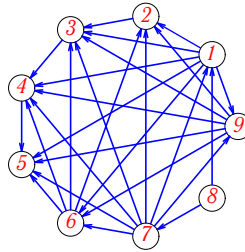
Задача G-18.15.

3



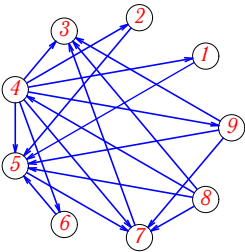
Задача G-18.16.

3



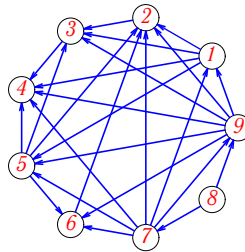
Задача G-18.17.

3



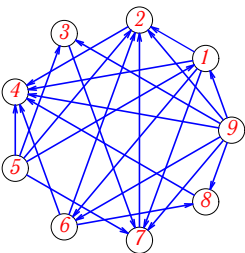
Задача G-18.18.

3



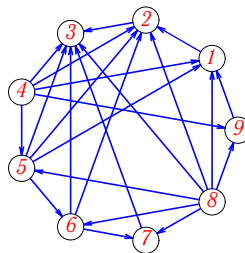
Задача G-18.19.

3



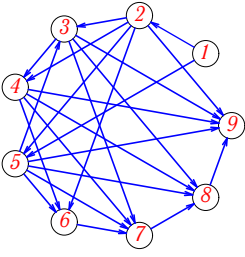
Задача G-18.20.

3



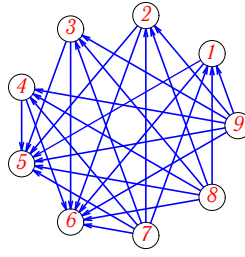
Задача G-18.21.

3



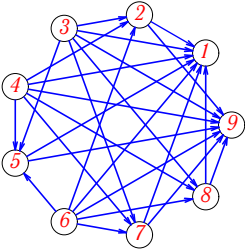
Задача G-18.22.

3



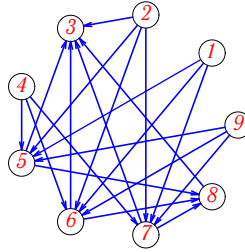
Задача G-18.23.

3



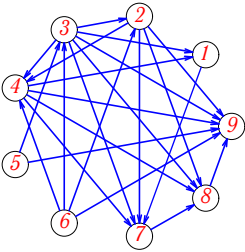
Задача G-18.24.

3



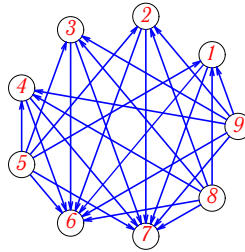
Задача G-18.25.

3



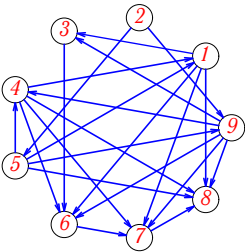
Задача G-18.26.

3



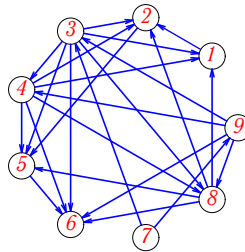
Задача G-18.27.

3



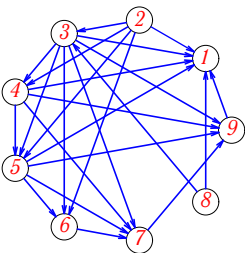
Задача G-18.28.

3



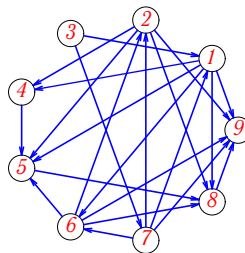
Задача G-18.29.

3



Задача G-18.30.

3



G-18

Ответы.

Топологическая сортировка бесконтурной сети

25.11.2013

1	1,9,(8,5,2,3)6, 4, 7
2	5 , 1 , 2 , 3 , 4 , 6 , 7 , 8 , 9
3	(3,7) ,4 ,2 ,5 ,6 ,8 ,9 ,1
4	1 , 2 , 6 , 7 , 5 , 3 , 4 , 8 , 9
5	6 , 2 , 4 , 5 , 3 , 7 , 8 , 9 , 1
6	5 , 6 , 7 , 8 , 9 , 1 , 2 , 4 , 3
7	(8,7), (2,1), (3,5), (9,6), 4
8	(8,2) ,1 ,9 ,3 ,4 ,5 ,6 ,7
9	4,3,(9,6,7,2)8, 5, 1
10	1 , 8 , 5 , 3 , 7 , 9 , 2 , 4 , 6
11	1 , 9 , 6 , 5 , 7 , 3 , 2 , 4 , 8
12	9,1,(2,7,5,3)6, 4, 8
13	7 , 8 , 9 , 4 , 1 , 6 , 2 , 3 , 5
14	5 , 3 , 2 , 7 , 9 , 6 , 4 , 8 , 1
15	2,1,(4,3,5,9)6, 7, 8
16	8 , 7 , 1 , 9 , 6 , 2 , 3 , 4 , 5
17	8,4,(6,1,2,9)5, 7, 3
18	8 , 7 , 9 , 1 , 5 , 6 , 2 , 3 , 4
19	(9,5), (3,1), (7,6), (2,8), 4
20	(8,4), (9,5), (1,6), (2,7), 3
21	1 , 2 , 5 , 3 , 4 , 6 , 7 , 8 , 9
22	(8,9,7),(1,2,3,4),(6,5)
23	(3,6,4),(5,2,7,8),(9,1)
24	(9,4,1,2),(5,6,7),8,3.
25	(5,6) ,3 ,2 ,4 ,1 ,7 ,8 ,9
26	(5,8,9),(1,3,4,2),(6,7)
27	2 , 5 , 9 , 4 , 1 , 3 , 6 , 7 , 8
28	7 , 9 , 3 , 4 , 8 , 1 , 2 , 5 , 6
29	(8,2) ,3 ,4 ,5 ,6 ,7 ,9 ,1
30	3 , 7 , 1 , 6 , 2 , 4 , 5 , 8 , 9

G-18 файл о18г3А